

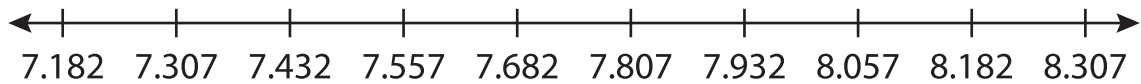
Name : _____

Number Line Subtraction

Hops-thousandth: S4

Indicate hops on each number line and complete the subtraction sentences.

1) $8.307 - 1.125 =$ _____



2) $9.035 - 0.035 =$ _____



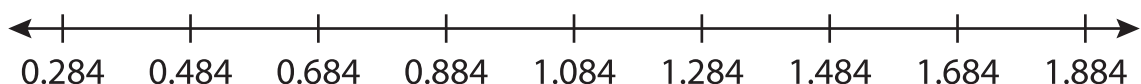
3) $11.296 - 0.035 =$ _____



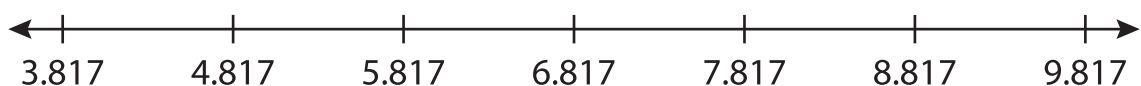
4) $3.307 - 0.035 =$ _____



5) $1.884 - 0.035 =$ _____



6) $8.817 - 5 =$ _____



PREVIEW

Gain complete access to the largest collection of worksheets in all subjects!

Members, please log in to download this worksheet.

Not a member? Please sign up to gain complete access.

www.mathworksheets4kids.com