

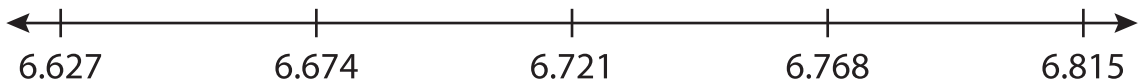
Name : _____

Number Line Subtraction

Hops-thousandth: S5

Indicate hops on each number line and complete the subtraction sentences.

1) $6.815 - 0.188 =$ _____



2) $8.843 - 2.5 =$ _____



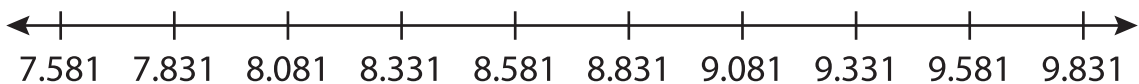
3) $10.064 - 0.133 =$ _____




4) $5.027 - 0.045 =$ _____



5) $9.581 - 0.003 =$ _____



6) $1.734 - 0.003 =$ _____



PREVIEW

Gain complete access to the largest collection of worksheets in all subjects!

Members, please log in to download this worksheet.

Not a member? Please sign up to gain complete access.

www.mathworksheets4kids.com