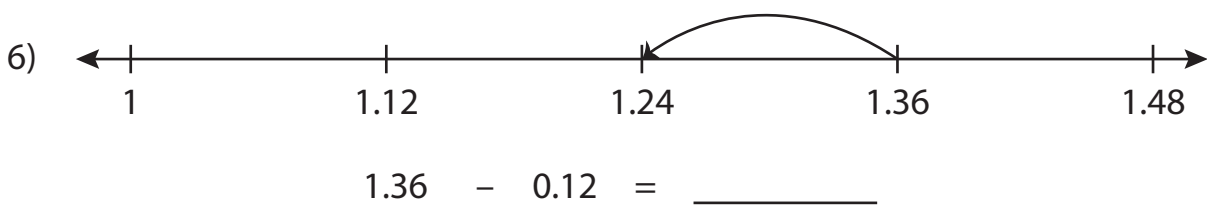
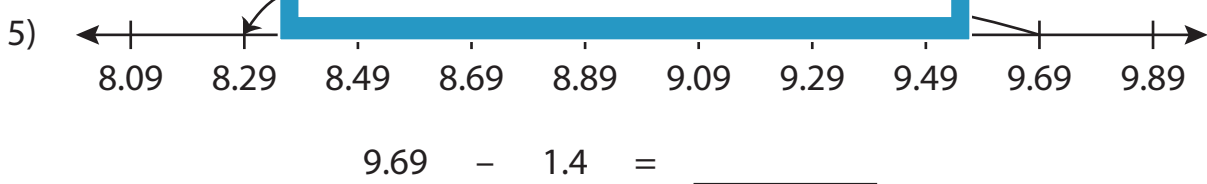
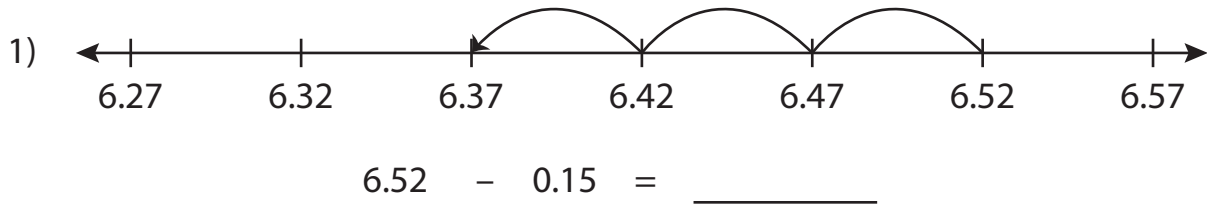


Name : _____

Number Line Subtraction

Hundredth: S1

Read each number line and solve the problem.



PREVIEW

Gain complete access to the largest collection of worksheets in all subjects!

Members, please log in to download this worksheet.

Not a member? Please sign up to gain complete access.

www.mathworksheets4kids.com

Name : _____

Answer key

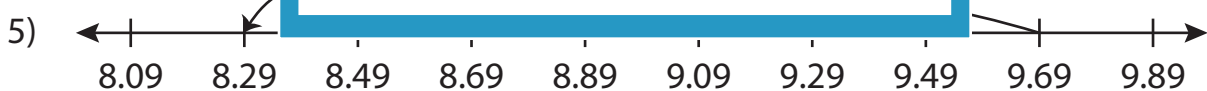
Number Line Subtraction

Hundredth: S1

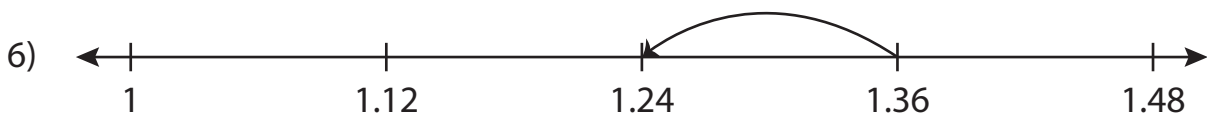
Read each number line and solve the problem.



$$6.52 - 0.15 = \underline{6.37}$$



$$9.69 - 1.4 = \underline{8.29}$$



$$1.36 - 0.12 = \underline{1.24}$$

PREVIEW

Gain complete access to the largest collection of worksheets in all subjects!

Members, please log in to download this worksheet.

Not a member? Please sign up to gain complete access.

www.mathworksheets4kids.com