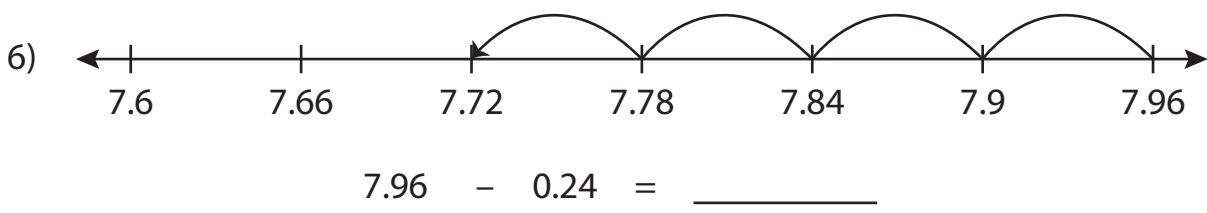
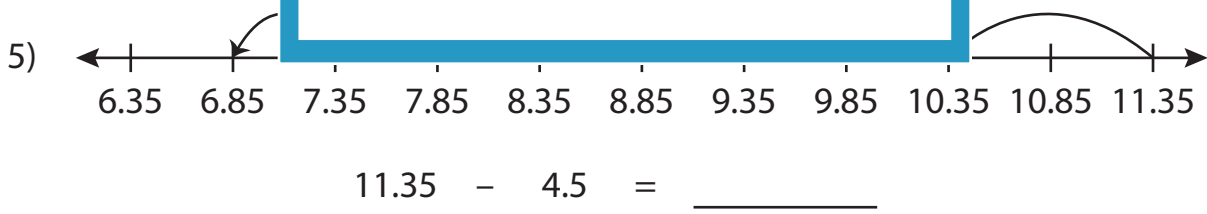
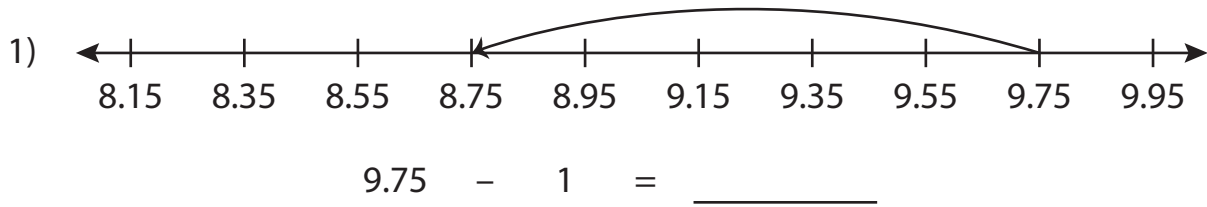


Name : \_\_\_\_\_

# Number Line Subtraction

Hundredth: S2

Read each number line and solve the problem.



**PREVIEW**

Gain complete access to the largest collection of worksheets in all subjects!

Members, please log in to download this worksheet.

Not a member? Please sign up to gain complete access.

[www.mathworksheets4kids.com](http://www.mathworksheets4kids.com)

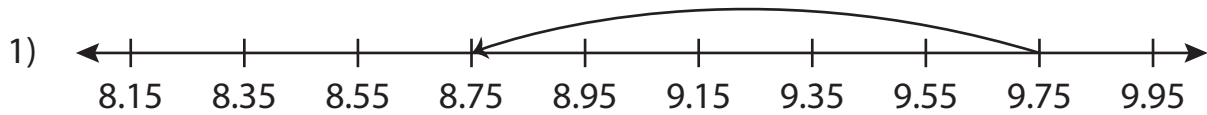
Name : \_\_\_\_\_

## Answer key

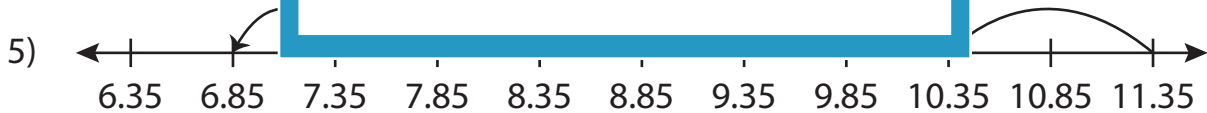
# Number Line Subtraction

Hundredth: S2

Read each number line and solve the problem.



$$9.75 - 1 = \underline{8.75}$$



$$11.35 - 4.5 = \underline{6.85}$$



$$7.96 - 0.24 = \underline{7.72}$$

**PREVIEW**

Gain complete access to the largest collection of worksheets in all subjects!

Members, please log in to download this worksheet.

Not a member? Please sign up to gain complete access.

[www.mathworksheets4kids.com](http://www.mathworksheets4kids.com)