

Name : _____

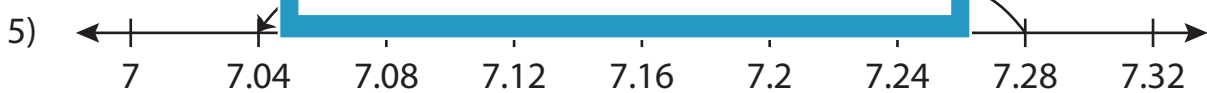
Number Line Subtraction

Hundredth: 53

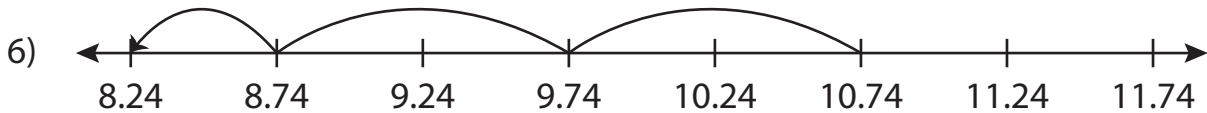
Read each number line and solve the problem.



$$4.05 - 0.4 = \underline{\hspace{2cm}}$$



$$7.28 - 0.24 = \underline{\hspace{2cm}}$$



$$10.74 - 2.5 = \underline{\hspace{2cm}}$$

PREVIEW

Gain complete access to the largest collection of worksheets in all subjects!

Members, please log in to download this worksheet.

Not a member? Please sign up to gain complete access.

www.mathworksheets4kids.com

Name : _____

Answer key

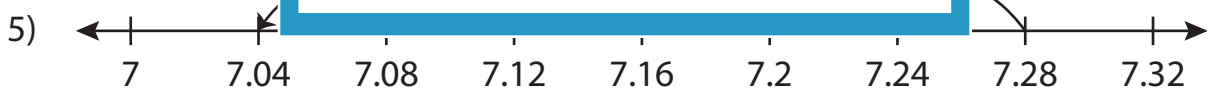
Number Line Subtraction

Hundredth: S3

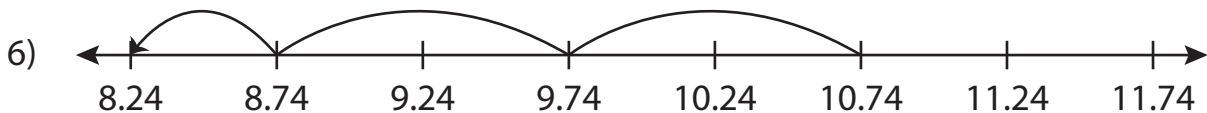
Read each number line and solve the problem.



$$4.05 - 0.4 = \underline{3.65}$$



$$7.28 - 0.24 = \underline{7.04}$$



$$10.74 - 2.5 = \underline{8.24}$$

PREVIEW

Gain complete access to the largest collection of worksheets in all subjects!

Members, please log in to download this worksheet.

Not a member? Please sign up to gain complete access.

www.mathworksheets4kids.com