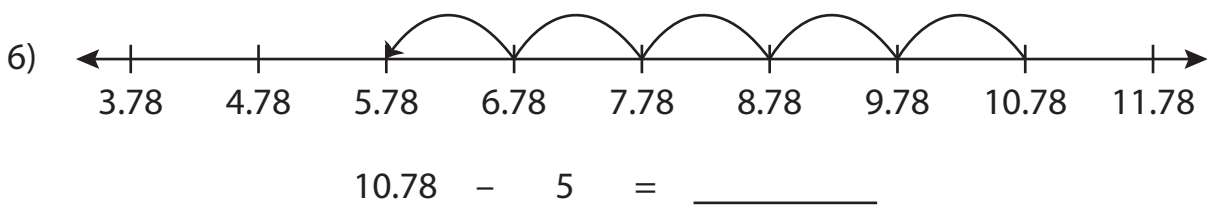
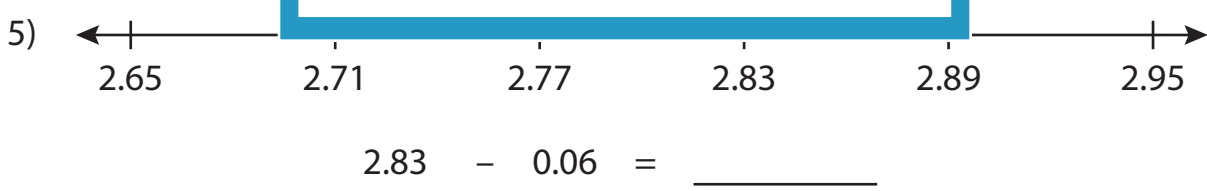
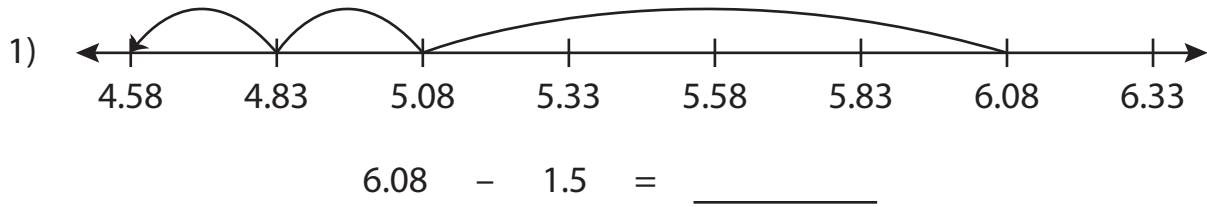


Name : _____

Number Line Subtraction

Hundredth: S5

Read each number line and solve the problem.



PREVIEW

Gain complete access to the largest collection of worksheets in all subjects!

Members, please log in to download this worksheet.

Not a member? Please sign up to gain complete access.

www.mathworksheets4kids.com

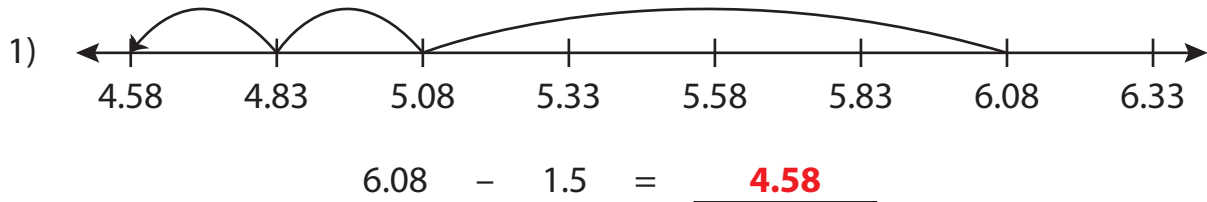
Name : _____

Answer key

Number Line Subtraction

Hundredth: S5

Read each number line and solve the problem.



$$2.83 - 0.06 = \underline{2.77}$$



$$10.78 - 5 = \underline{5.78}$$

PREVIEW

Gain complete access to the largest collection of worksheets in all subjects!

Members, please log in to download this worksheet.

Not a member? Please sign up to gain complete access.

www.mathworksheets4kids.com