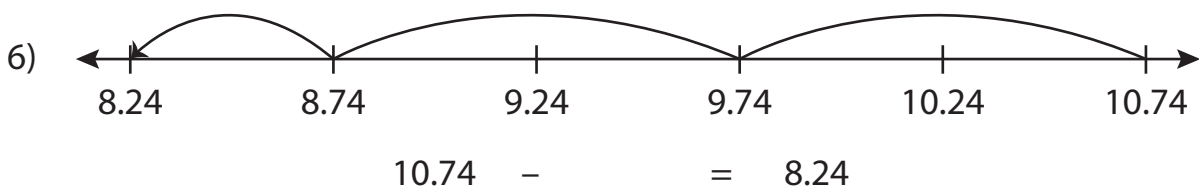

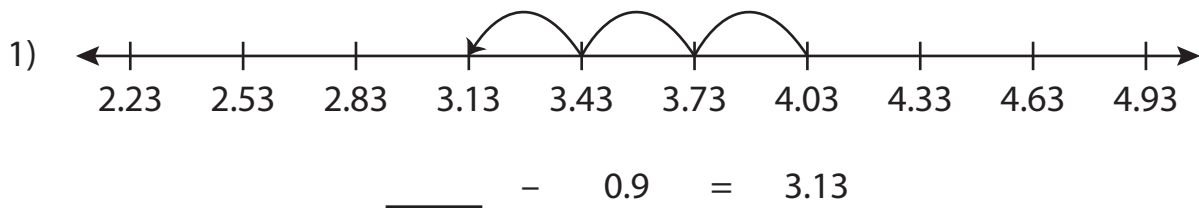


Name : _____

Subtraction Sentence - Missing Numbers

Hundredth: S1

Complete the subtraction sentence that describes each model.



PREVIEW

Gain complete access to the largest collection of worksheets in all subjects!

Members, please log in to download this worksheet.

Not a member? Please sign up to gain complete access.

www.mathworksheets4kids.com

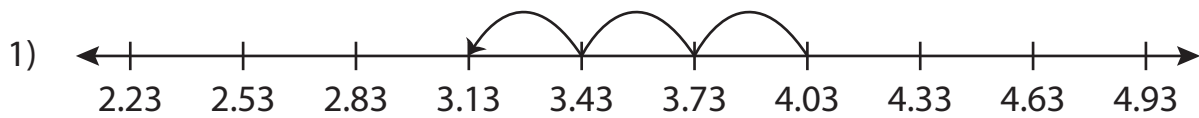
Name : _____

Answer key

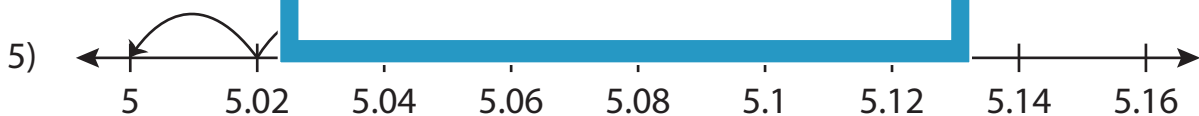
Subtraction Sentence - Missing Numbers

Hundredth: S1

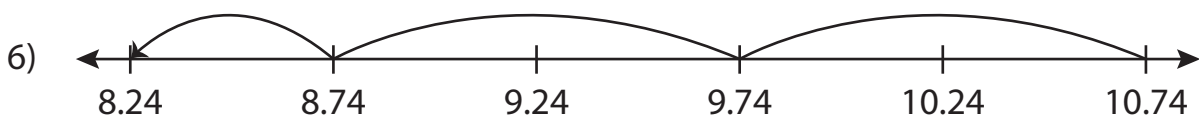
Complete the subtraction sentence that describes each model.



$$\underline{4.03} - 0.9 = 3.13$$



$$\underline{5.12} - 0.12 = 5$$



$$10.74 - \underline{2.5} = 8.24$$

PREVIEW

Gain complete access to the largest collection of worksheets in all subjects!

Members, please log in to download this worksheet.

Not a member? Please sign up to gain complete access.

www.mathworksheets4kids.com