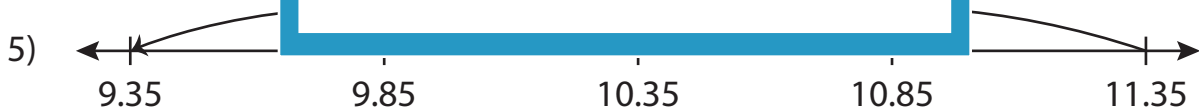
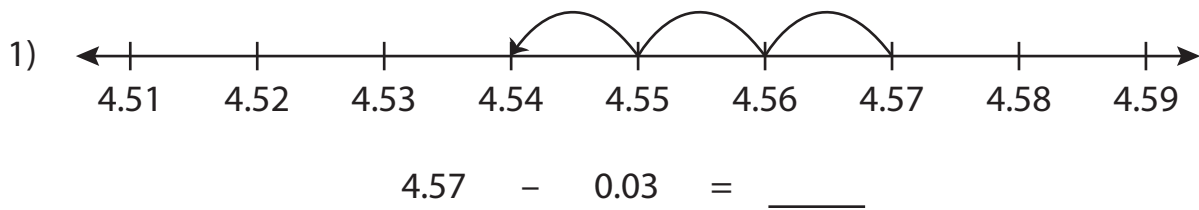


Name : _____

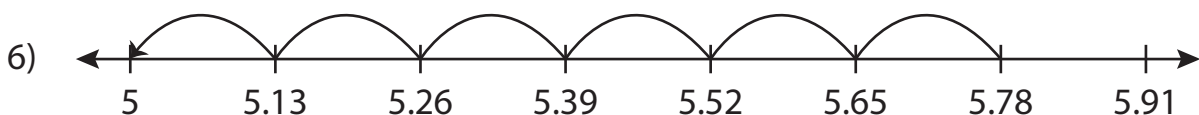
Subtraction Sentence - Missing Numbers

Hundredth: S3

Complete the subtraction sentence that describes each model.



_____ - 2 = 9.35



5.78 - 0.78 = _____

PREVIEW

Gain complete access to the largest collection of worksheets in all subjects!

Members, please log in to download this worksheet.

Not a member? Please sign up to gain complete access.

www.mathworksheets4kids.com

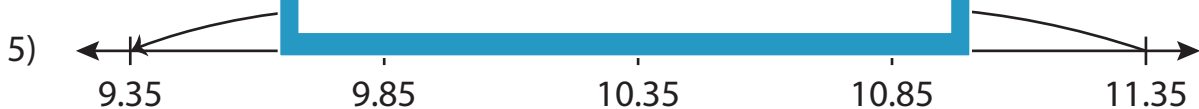
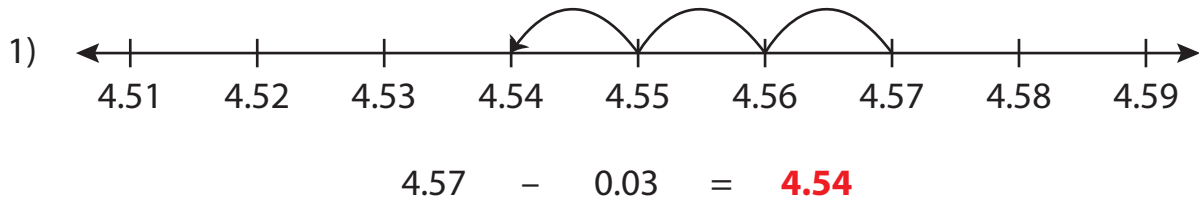
Name : _____

Answer key

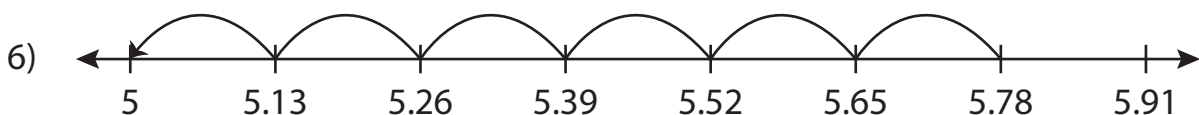
Subtraction Sentence - Missing Numbers

Hundredth: S3

Complete the subtraction sentence that describes each model.



$$\underline{11.35} - 2 = 9.35$$



$$5.78 - 0.78 = \underline{5}$$

PREVIEW

Gain complete access to the largest collection of worksheets in all subjects!

Members, please log in to download this worksheet.

Not a member? Please sign up to gain complete access.

www.mathworksheets4kids.com