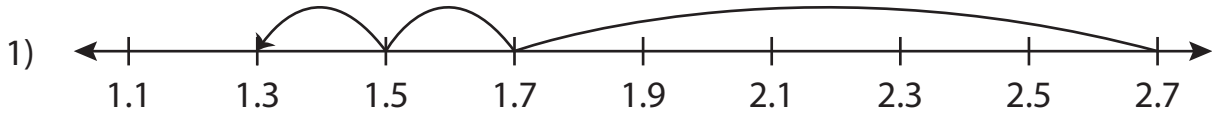


Name : \_\_\_\_\_

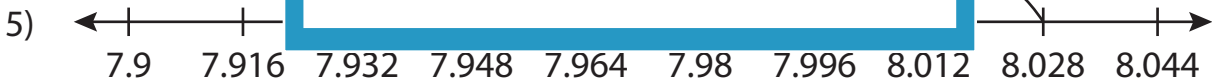
## Subtraction Sentence - Missing Numbers

Sheet 1

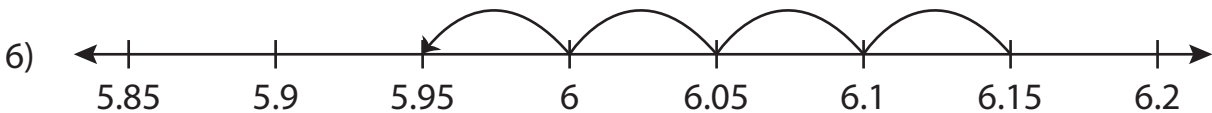
Complete the subtraction sentence that describes each model.



$$2.7 - \underline{\quad\quad} = 1.3$$



$$\underline{\quad\quad} - 0.08 = 7.948$$



$$6.15 - \underline{\quad\quad} = 5.95$$

**PREVIEW**

Gain complete access to the largest collection of worksheets in all subjects!

Members, please log in to download this worksheet.

Not a member? Please sign up to gain complete access.

[www.mathworksheets4kids.com](http://www.mathworksheets4kids.com)

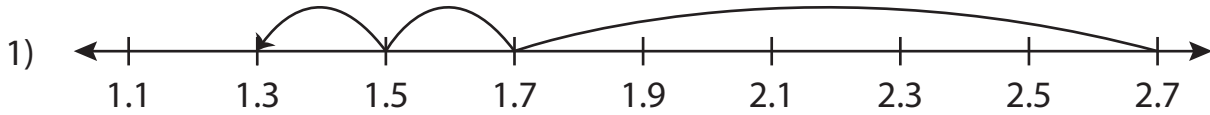
Name : \_\_\_\_\_

## Answer key

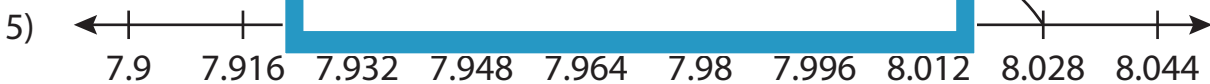
### Subtraction Sentence - Missing Numbers

Sheet 1

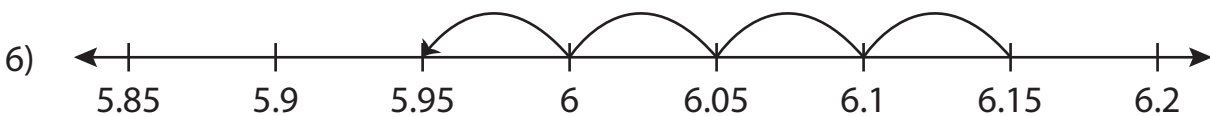
Complete the subtraction sentence that describes each model.



$$2.7 - \underline{1.4} = 1.3$$



$$\underline{8.028} - 0.08 = 7.948$$



$$6.15 - \underline{0.2} = 5.95$$

**PREVIEW**

Gain complete access to the largest collection of worksheets in all subjects!

Members, please log in to download this worksheet.

Not a member? Please sign up to gain complete access.

[www.mathworksheets4kids.com](http://www.mathworksheets4kids.com)