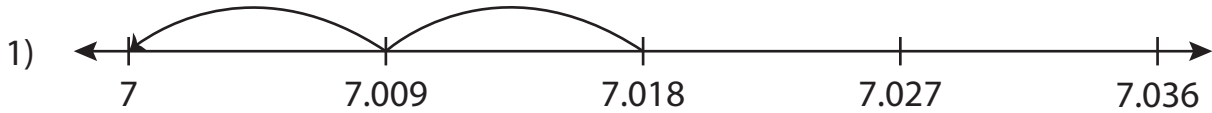
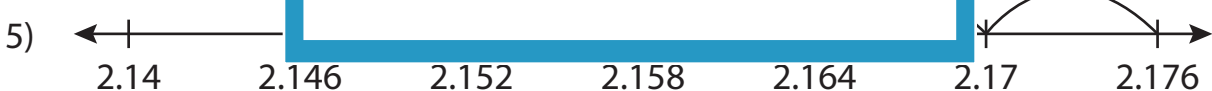


Subtraction Sentence - Missing Numbers

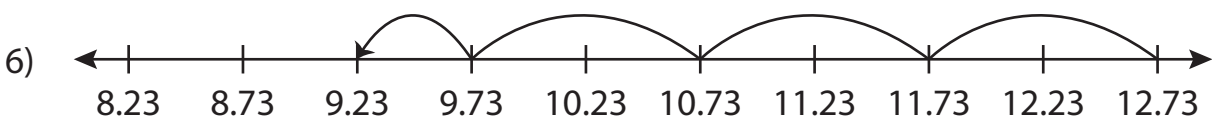
Complete the subtraction sentence that describes each model.



$$7.018 - 0.018 = \underline{\hspace{2cm}}$$



$$2.176 - \underline{\hspace{2cm}} = 2.146$$



$$12.73 - 3.5 = \underline{\hspace{2cm}}$$

PREVIEW

Gain complete access to the largest collection of worksheets in all subjects!

Members, please log in to download this worksheet.

Not a member? Please sign up to gain complete access.

www.mathworksheets4kids.com

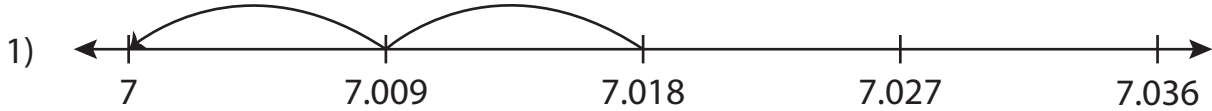
Name : _____

Answer key

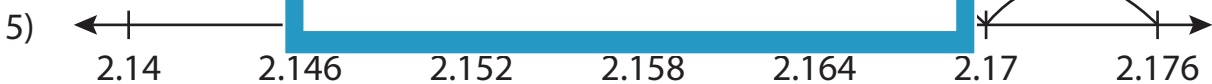
Subtraction Sentence - Missing Numbers

Sheet 2

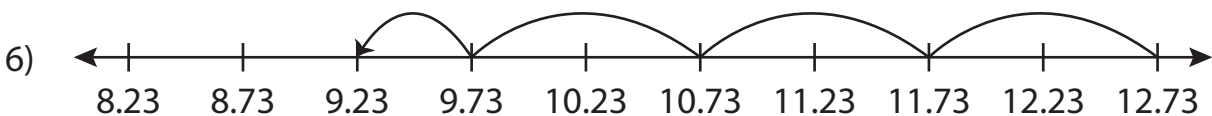
Complete the subtraction sentence that describes each model.



$$7.018 - 0.018 = \underline{7}$$



$$2.176 - \underline{0.03} = 2.146$$



$$12.73 - 3.5 = \underline{9.23}$$

PREVIEW

Gain complete access to the largest collection of worksheets in all subjects!

Members, please log in to download this worksheet.

Not a member? Please sign up to gain complete access.

www.mathworksheets4kids.com