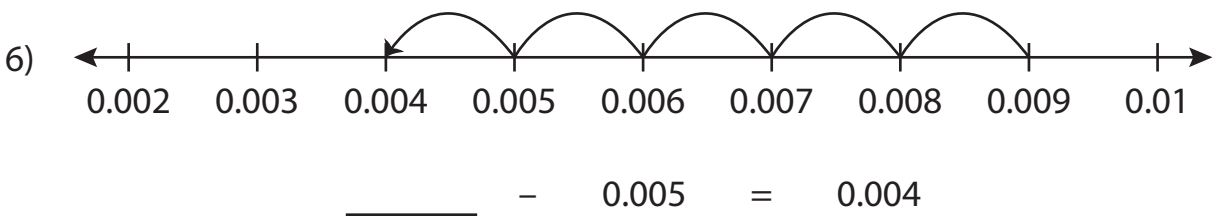

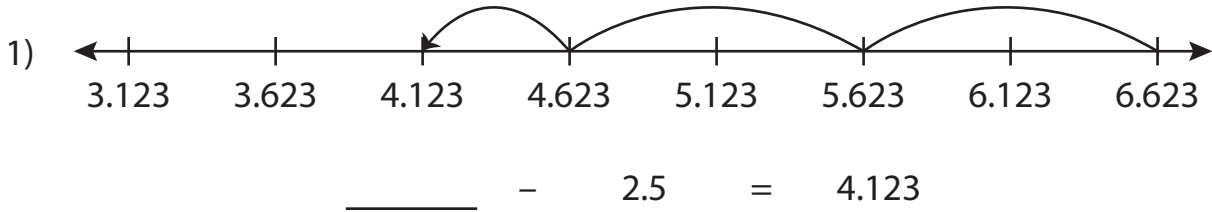


Subtraction Sentence - Missing Numbers

Complete the subtraction sentence that describes each model.



PREVIEW

Gain complete access to the largest collection of worksheets in all subjects!

Members, please log in to download this worksheet.

Not a member? Please sign up to gain complete access.

www.mathworksheets4kids.com

Name : _____

Answer key

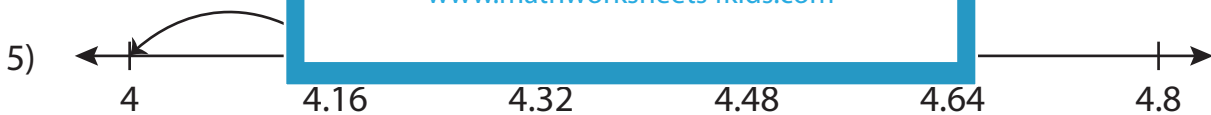
Subtraction Sentence - Missing Numbers

Sheet 3

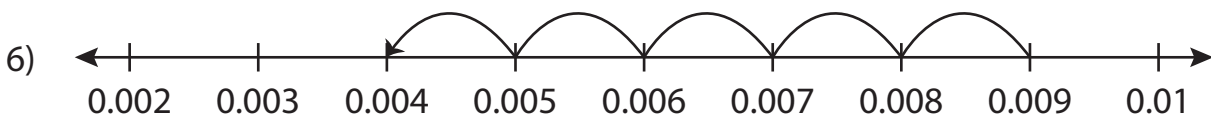
Complete the subtraction sentence that describes each model.



$$\underline{6.623} - 2.5 = 4.123$$



$$4.48 - 0.48 = \underline{4}$$



$$\underline{0.009} - 0.005 = 0.004$$

PREVIEW

Gain complete access to the largest collection of worksheets in all subjects!

Members, please log in to download this worksheet.

Not a member? Please sign up to gain complete access.

www.mathworksheets4kids.com