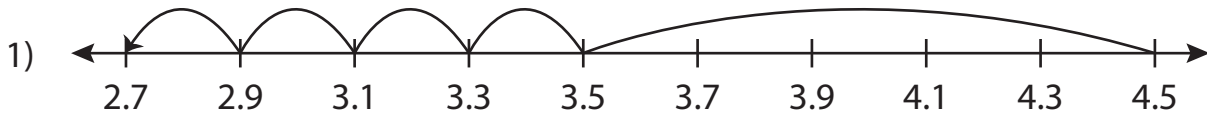


Name : \_\_\_\_\_

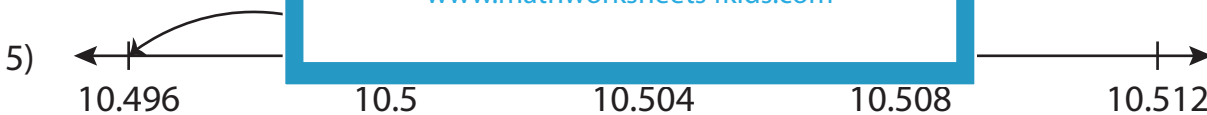
## Subtraction Sentence - Missing Numbers

Sheet 5

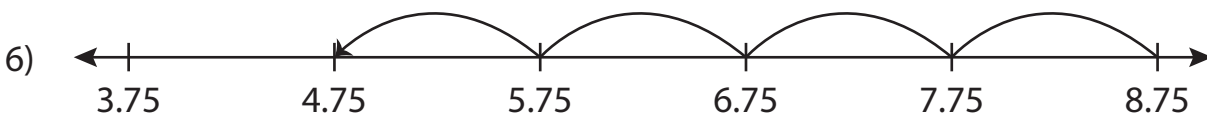
Complete the subtraction sentence that describes each model.



$$\underline{\hspace{2cm}} - 1.8 = 2.7$$



$$10.504 - \underline{\hspace{2cm}} = 10.496$$



$$8.75 - 4 = \underline{\hspace{2cm}}$$

**PREVIEW**

Gain complete access to the largest collection of worksheets in all subjects!

Members, please log in to download this worksheet.

Not a member? Please sign up to gain complete access.

[www.mathworksheets4kids.com](http://www.mathworksheets4kids.com)

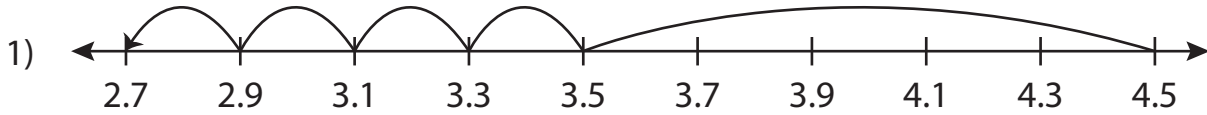
Name : \_\_\_\_\_

## Answer key

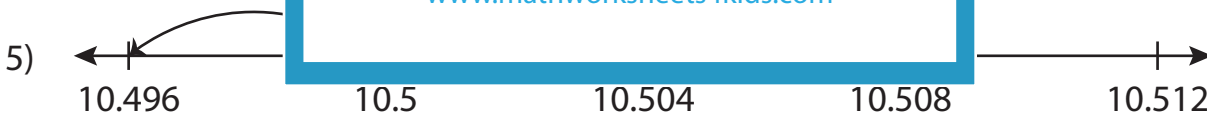
### Subtraction Sentence - Missing Numbers

Sheet 5

Complete the subtraction sentence that describes each model.



$$\underline{4.5} - 1.8 = 2.7$$



$$10.504 - \underline{0.008} = 10.496$$



$$8.75 - 4 = \underline{4.75}$$

**PREVIEW**

Gain complete access to the largest collection of worksheets in all subjects!

Members, please log in to download this worksheet.

Not a member? Please sign up to gain complete access.

[www.mathworksheets4kids.com](http://www.mathworksheets4kids.com)