
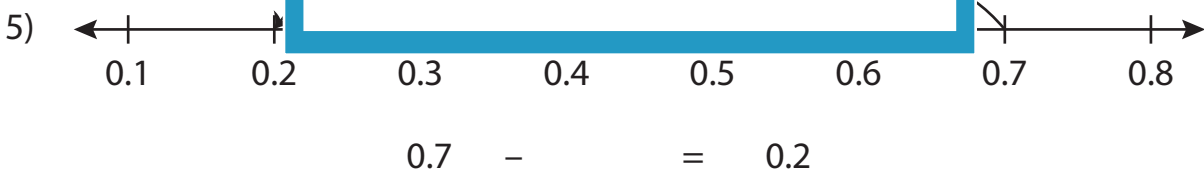
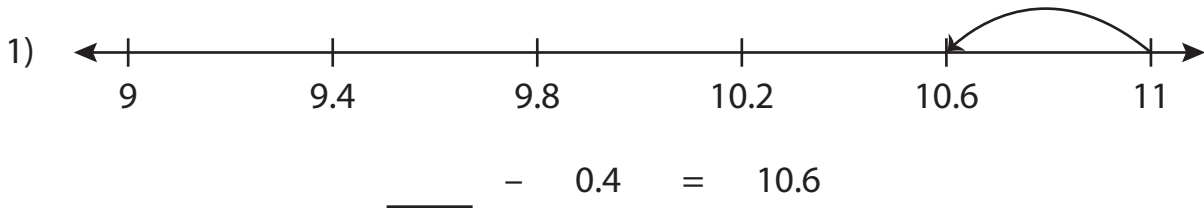


Name : _____

Subtraction Sentence - Missing Numbers

Tenth: S1

Complete the subtraction sentence that describes each model.



PREVIEW

Gain complete access to the largest collection of worksheets in all subjects!

Members, please log in to download this worksheet.

Not a member? Please sign up to gain complete access.

www.mathworksheets4kids.com

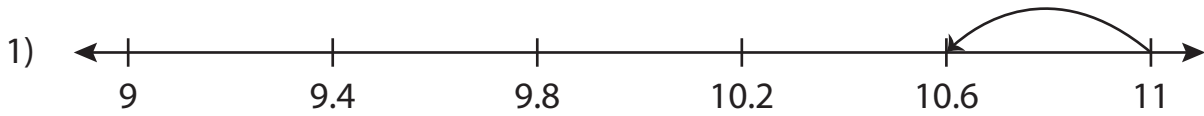
Name : _____

Answer key

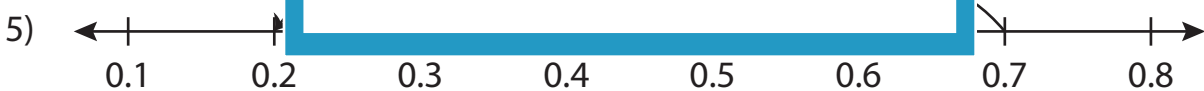
Subtraction Sentence - Missing Numbers

Tenth: S1


Complete the subtraction sentence that describes each model.



$$\underline{11} - 0.4 = 10.6$$



$$0.7 - \underline{0.5} = 0.2$$



$$\underline{2.4} - 0.7 = 1.7$$

PREVIEW

Gain complete access to the largest collection of worksheets in all subjects!

Members, please log in to download this worksheet.

Not a member? Please sign up to gain complete access.

www.mathworksheets4kids.com