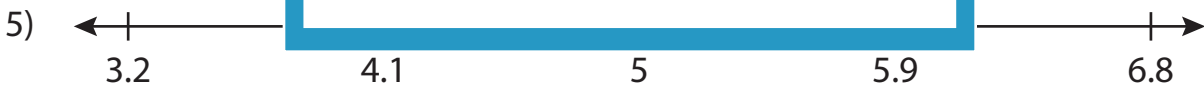
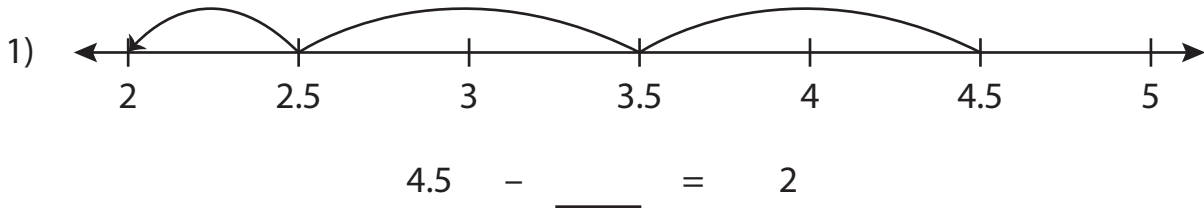


Name : _____

Subtraction Sentence - Missing Numbers

Tenth: S2

Complete the subtraction sentence that describes each model.



$$5.9 - \underline{\quad} = 5$$



$$\underline{\quad} - 0.3 = 6.2$$

PREVIEW

Gain complete access to the largest collection of worksheets in all subjects!

Members, please log in to download this worksheet.

Not a member? Please sign up to gain complete access.

www.mathworksheets4kids.com

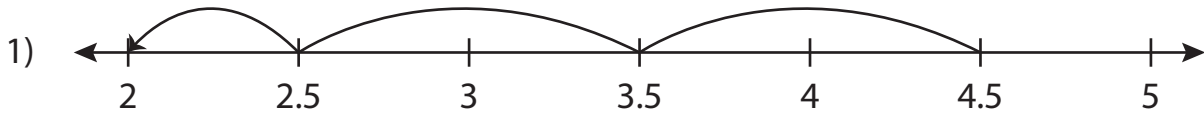
Name: _____

Answer key

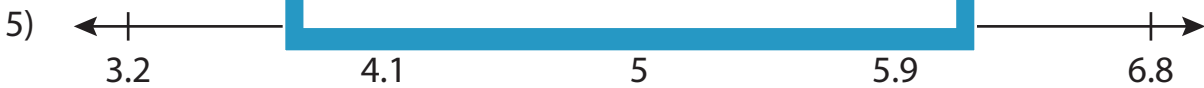
Subtraction Sentence - Missing Numbers

Tenth: S2

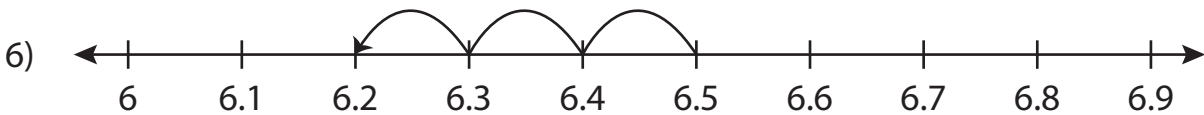
Complete the subtraction sentence that describes each model.



$$4.5 - \underline{2.5} = 2$$



$$5.9 - \underline{0.9} = 5$$



$$\underline{6.5} - 0.3 = 6.2$$

PREVIEW

Gain complete access to the largest collection of worksheets in all subjects!

Members, please log in to download this worksheet.

Not a member? Please sign up to gain complete access.

www.mathworksheets4kids.com