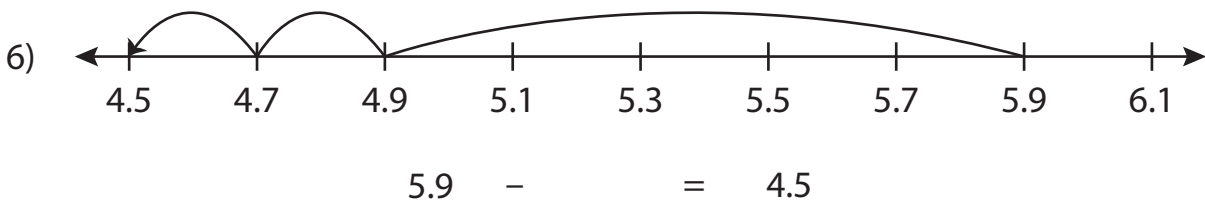
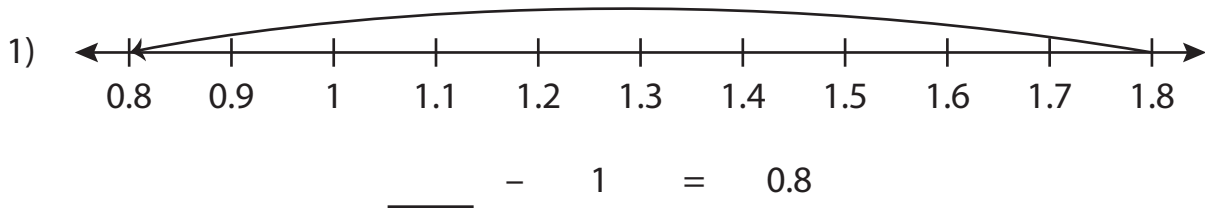


Name : _____

Subtraction Sentence - Missing Numbers

Tenth: S3

Complete the subtraction sentence that describes each model.



PREVIEW

Gain complete access to the largest collection of worksheets in all subjects!

Members, please log in to download this worksheet.

Not a member? Please sign up to gain complete access.

www.mathworksheets4kids.com

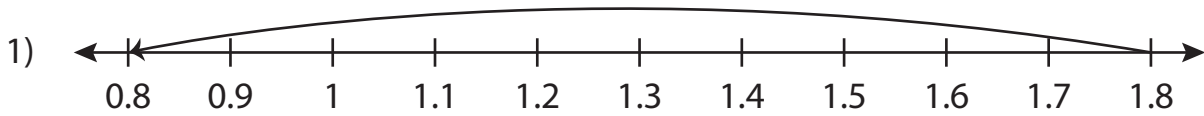
Name : _____

Answer key

Subtraction Sentence - Missing Numbers

Tenth: S3

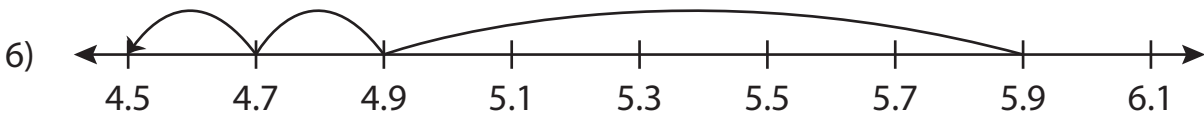
Complete the subtraction sentence that describes each model.



$$\underline{1.8} - 1 = 0.8$$



$$\underline{4} - 0.8 = 3.2$$



$$5.9 - \underline{1.4} = 4.5$$

PREVIEW

Gain complete access to the largest collection of worksheets in all subjects!

Members, please log in to download this worksheet.

Not a member? Please sign up to gain complete access.

www.mathworksheets4kids.com