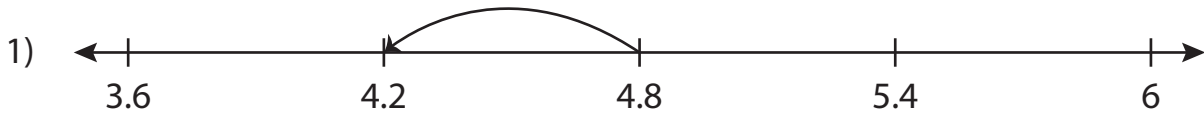


Name : \_\_\_\_\_

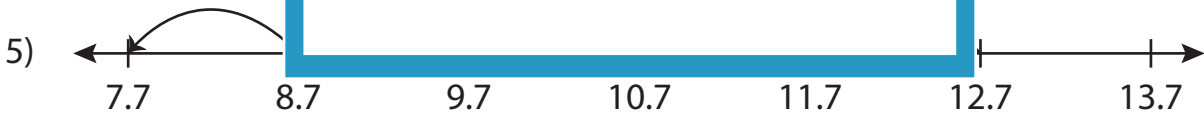
## Subtraction Sentence - Missing Numbers

Tenth: S4

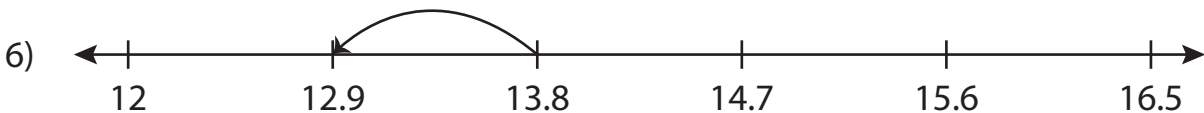
Complete the subtraction sentence that describes each model.



$$4.8 - \underline{\quad} = 4.2$$



$$12.7 - 5 = \underline{\quad}$$



$$13.8 - 0.9 = \underline{\quad}$$

**PREVIEW**

Gain complete access to the largest collection of worksheets in all subjects!

Members, please log in to download this worksheet.

Not a member? Please sign up to gain complete access.

[www.mathworksheets4kids.com](http://www.mathworksheets4kids.com)

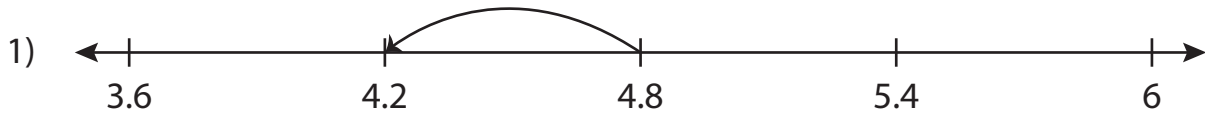
Name : \_\_\_\_\_

## Answer key

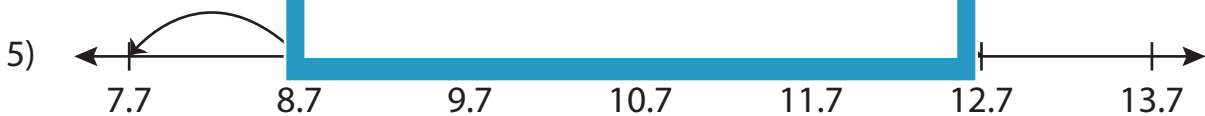
### Subtraction Sentence - Missing Numbers

Tenth: S4

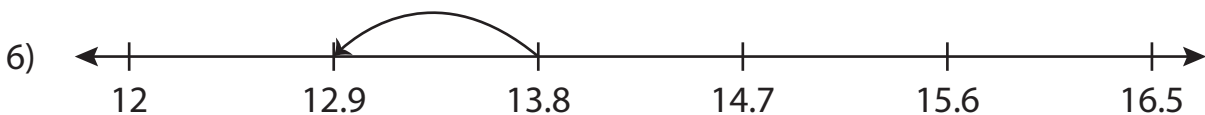
Complete the subtraction sentence that describes each model.



$$4.8 - \underline{0.6} = 4.2$$



$$12.7 - 5 = \underline{7.7}$$



$$13.8 - 0.9 = \underline{12.9}$$

**PREVIEW**

Gain complete access to the largest collection of worksheets in all subjects!

Members, please log in to download this worksheet.

Not a member? Please sign up to gain complete access.

[www.mathworksheets4kids.com](http://www.mathworksheets4kids.com)