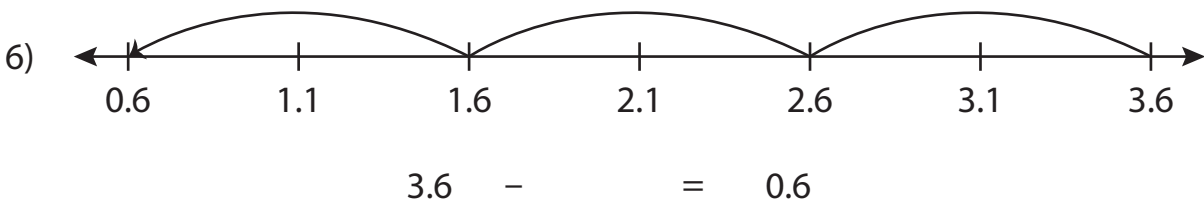
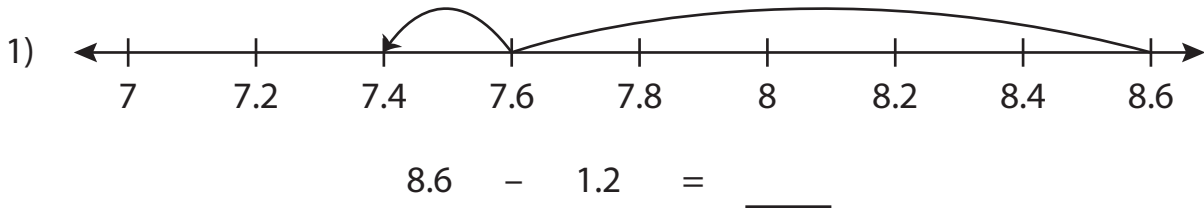


Name : _____

Subtraction Sentence - Missing Numbers

Tenth: S5

Complete the subtraction sentence that describes each model.



PREVIEW

Gain complete access to the largest collection of worksheets in all subjects!

Members, please log in to download this worksheet.

Not a member? Please sign up to gain complete access.

www.mathworksheets4kids.com

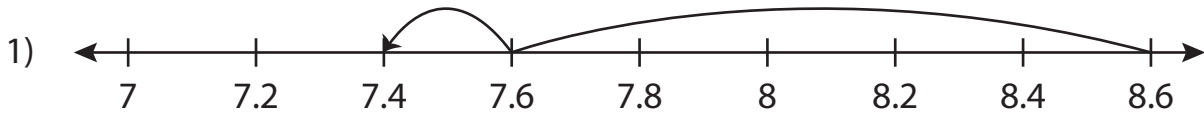
Name: _____

Answer key

Subtraction Sentence - Missing Numbers

Tenth: S5

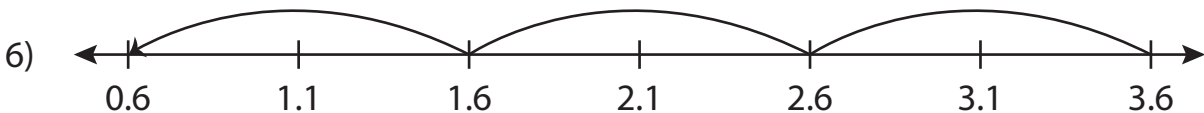
Complete the subtraction sentence that describes each model.



$$8.6 - 1.2 = \underline{7.4}$$



$$\underline{6.4} - 0.6 = 5.8$$



$$3.6 - \underline{3} = 0.6$$

PREVIEW

Gain complete access to the largest collection of worksheets in all subjects!

Members, please log in to download this worksheet.

Not a member? Please sign up to gain complete access.

www.mathworksheets4kids.com