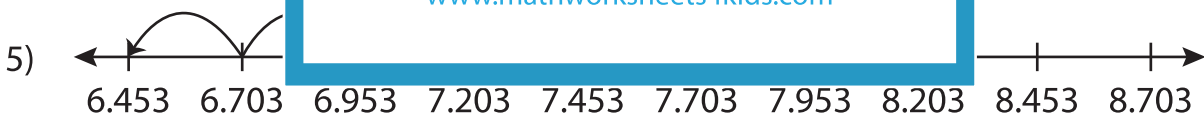
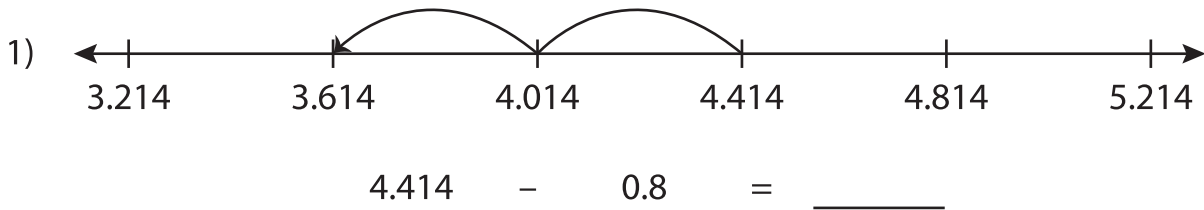


Name : _____

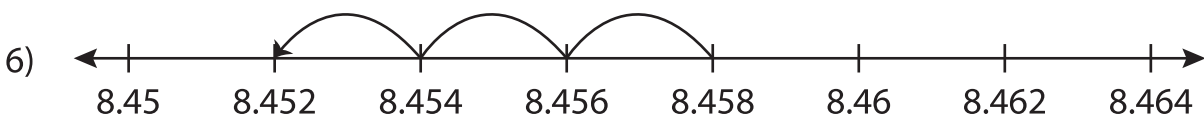
Subtraction Sentence - Missing Numbers

Thousandth: S1

Complete the subtraction sentence that describes each model.



$7.953 - \underline{\hspace{2cm}} = 6.453$



$\underline{\hspace{2cm}} - 0.006 = 8.452$

PREVIEW

Gain complete access to the largest collection of worksheets in all subjects!

Members, please log in to download this worksheet.

Not a member? Please sign up to gain complete access.

www.mathworksheets4kids.com