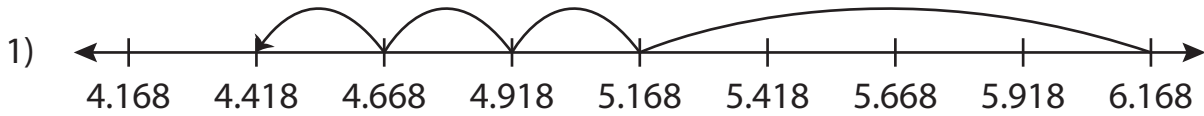


Name : _____

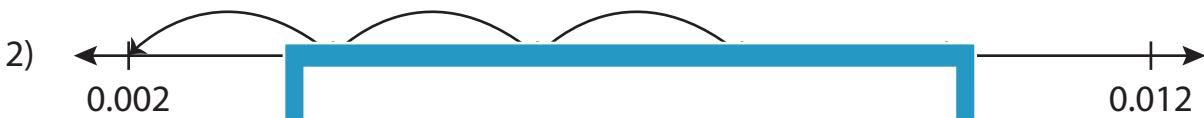
Subtraction Sentence - Missing Numbers

Thousandth: S2

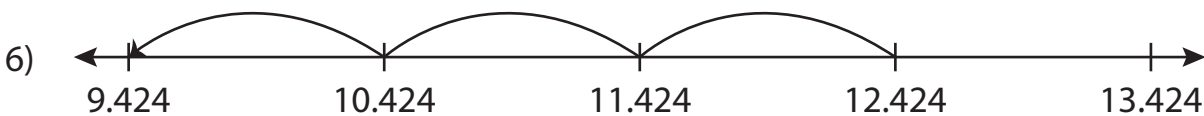
Complete the subtraction sentence that describes each model.



$$\underline{\hspace{2cm}} - 1.75 = 4.418$$



$$\underline{\hspace{2cm}} - 0.036 = 3.018$$



$$12.424 - 3 = \underline{\hspace{2cm}}$$

PREVIEW

Gain complete access to the largest collection of worksheets in all subjects!

Members, please log in to download this worksheet.

Not a member? Please sign up to gain complete access.

www.mathworksheets4kids.com

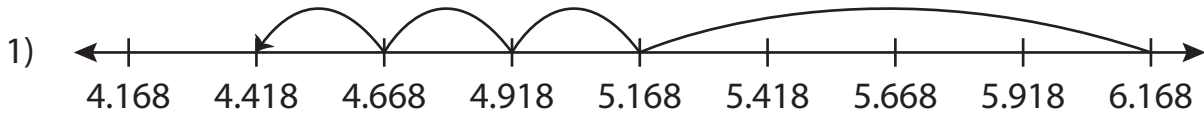
Name : _____

Answer key

Subtraction Sentence - Missing Numbers

Thousandth: S2

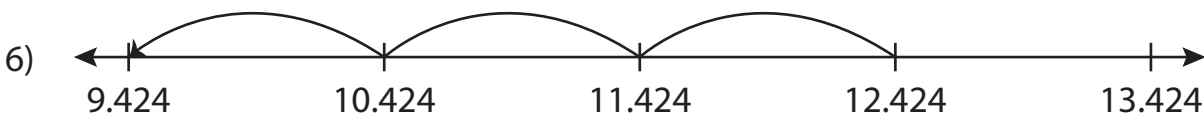
Complete the subtraction sentence that describes each model.



$$\underline{6.168} - 1.75 = 4.418$$



$$\underline{3.054} - 0.036 = 3.018$$



$$12.424 - 3 = \underline{9.424}$$

PREVIEW

Gain complete access to the largest collection of worksheets in all subjects!

Members, please log in to download this worksheet.

Not a member? Please sign up to gain complete access.

www.mathworksheets4kids.com