
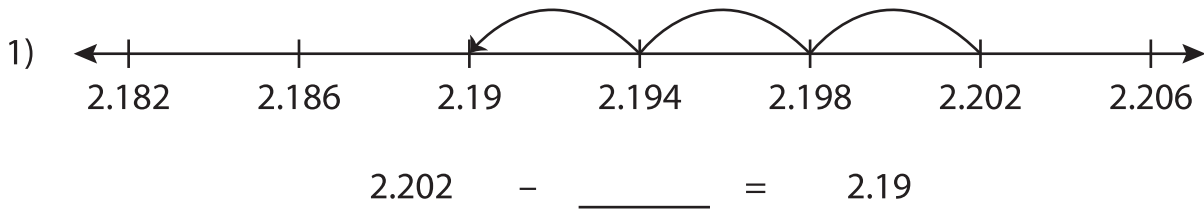


Name : _____

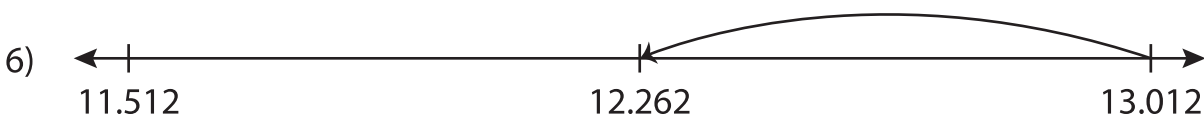
Subtraction Sentence - Missing Numbers

Thousandth: S3

Complete the subtraction sentence that describes each model.



$$9.388 - 0.055 = \underline{\hspace{2cm}}$$



$$\underline{\hspace{2cm}} - 0.75 = 12.262$$

PREVIEW

Gain complete access to the largest collection of worksheets in all subjects!

Members, please log in to download this worksheet.

Not a member? Please sign up to gain complete access.

www.mathworksheets4kids.com