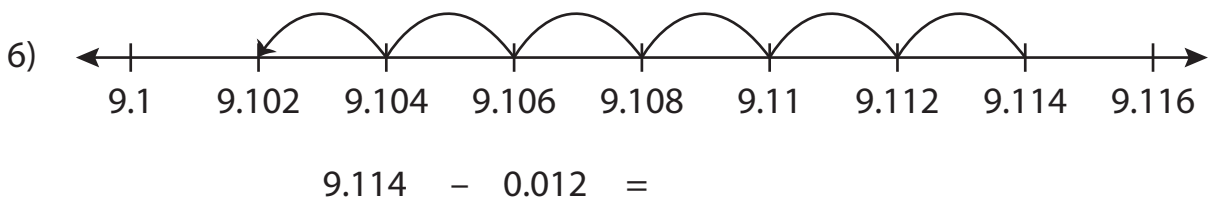
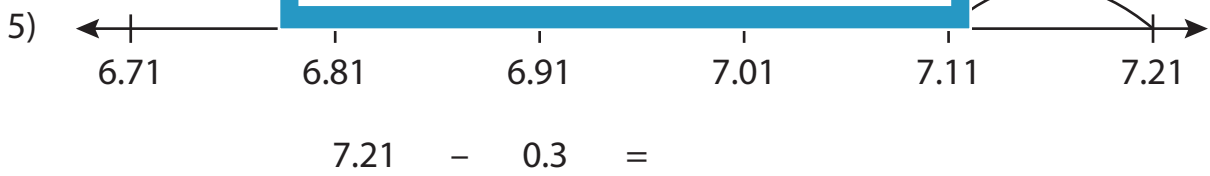
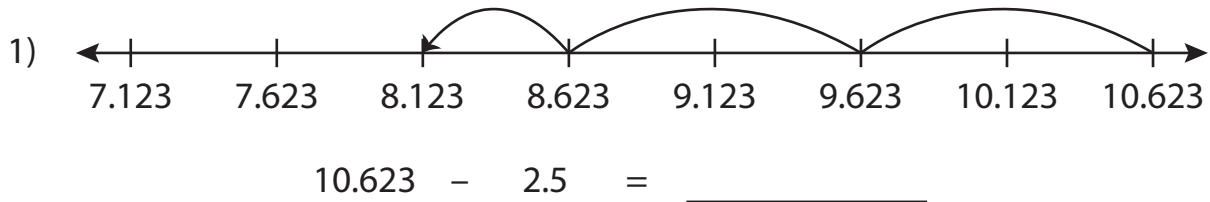


Name : _____

Number Line Subtraction

Sheet 1

Read each number line and solve the problem.



PREVIEW

Gain complete access to the largest collection of worksheets in all subjects!

Members, please log in to download this worksheet.

Not a member? Please sign up to gain complete access.

www.mathworksheets4kids.com

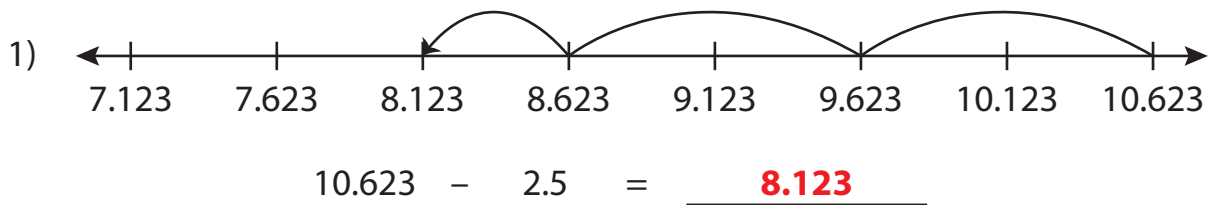
Name : _____

Answer key

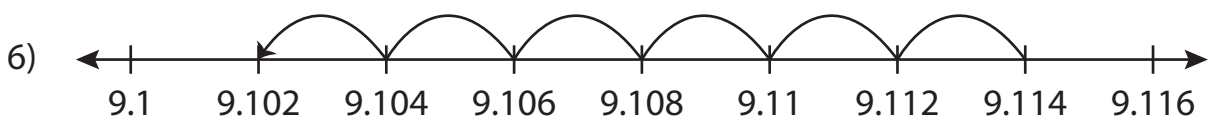
Number Line Subtraction

Sheet 1

Read each number line and solve the problem.



$$7.21 - 0.3 = \underline{6.91}$$



$$9.114 - 0.012 = \underline{9.102}$$

PREVIEW

Gain complete access to the largest collection of worksheets in all subjects!

Members, please log in to download this worksheet.

Not a member? Please sign up to gain complete access.

www.mathworksheets4kids.com