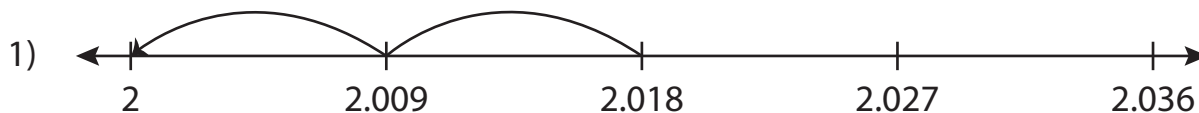


Name : _____

Number Line Subtraction

Sheet 3

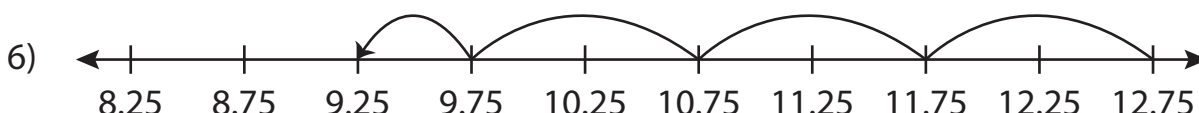
Read each number line and solve the problem.



$$2.018 - 0.018 = \underline{\hspace{2cm}}$$



$$1.6 - 1 = \underline{\hspace{2cm}}$$



$$12.75 - 3.5 = \underline{\hspace{2cm}}$$

PREVIEW

Gain complete access to the largest collection of worksheets in all subjects!

Members, please log in to download this worksheet.

Not a member? Please sign up to gain complete access.

www.mathworksheets4kids.com

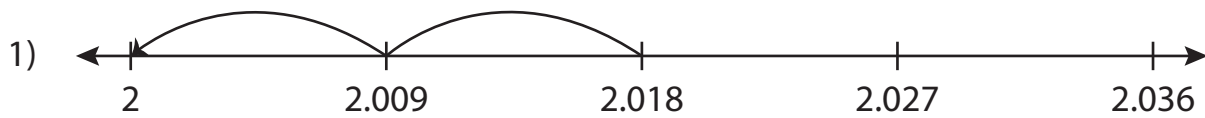
Name : _____

Answer key

Number Line Subtraction

Sheet 3

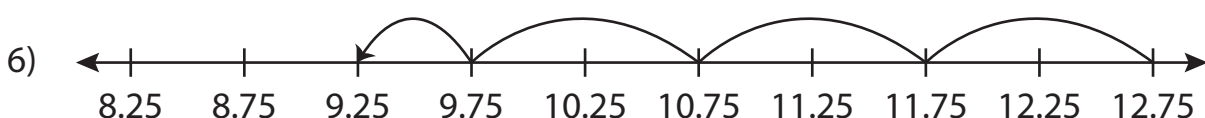
Read each number line and solve the problem.



$$2.018 - 0.018 = \underline{\quad 2 \quad}$$



$$1.6 - 1 = \underline{\quad 0.6 \quad}$$



$$12.75 - 3.5 = \underline{\quad 9.25 \quad}$$

PREVIEW

Gain complete access to the largest collection of worksheets in all subjects!

Members, please log in to download this worksheet.

Not a member? Please sign up to gain complete access.

www.mathworksheets4kids.com