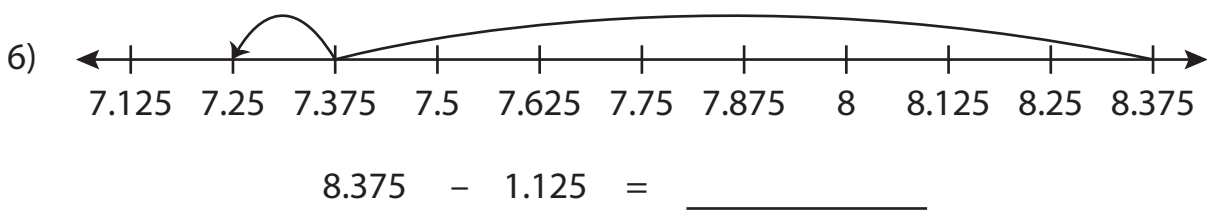
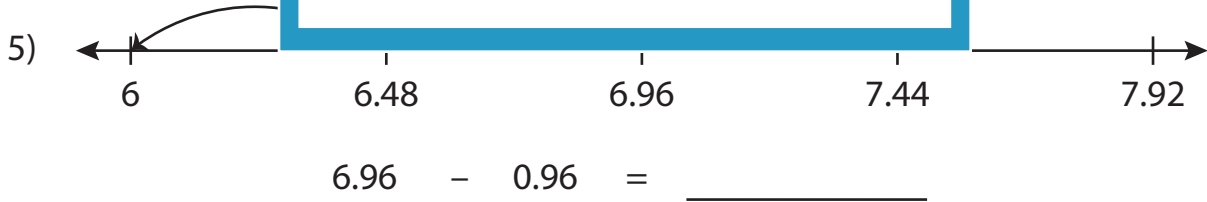
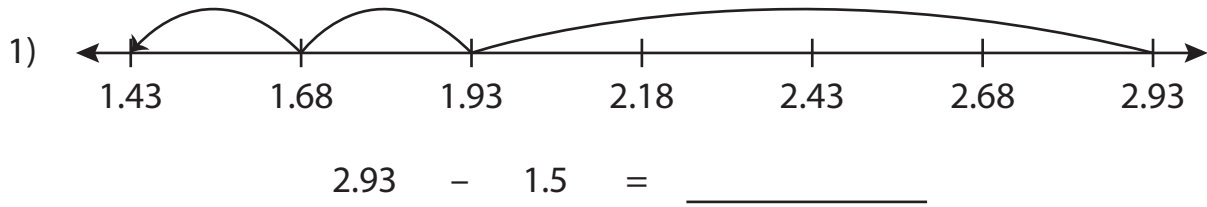


Number Line Subtraction

Read each number line and solve the problem.



PREVIEW

Gain complete access to the largest collection of worksheets in all subjects!

Members, please log in to download this worksheet.

Not a member? Please sign up to gain complete access.

www.mathworksheets4kids.com

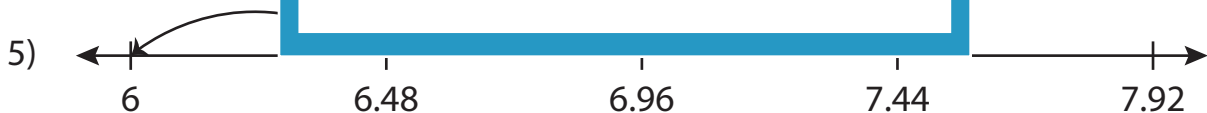
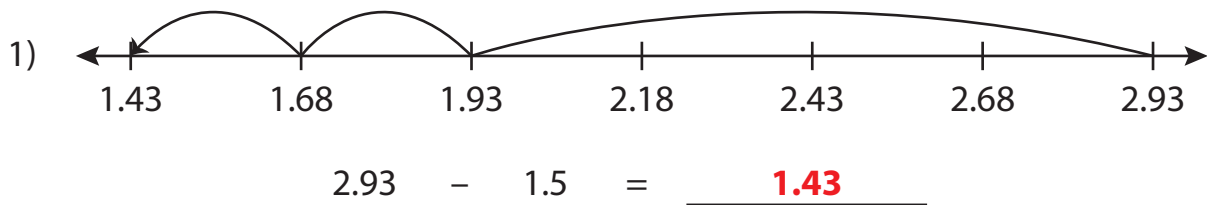
Name : _____

Answer key

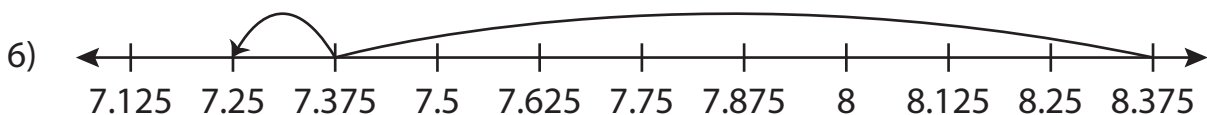
Number Line Subtraction

Sheet 4

Read each number line and solve the problem.



$$6.96 - 0.96 = \underline{6}$$



$$8.375 - 1.125 = \underline{7.25}$$

PREVIEW

Gain complete access to the largest collection of worksheets in all subjects!

Members, please log in to download this worksheet.

Not a member? Please sign up to gain complete access.

www.mathworksheets4kids.com