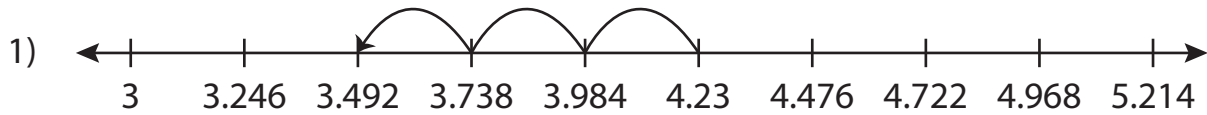


Name : _____

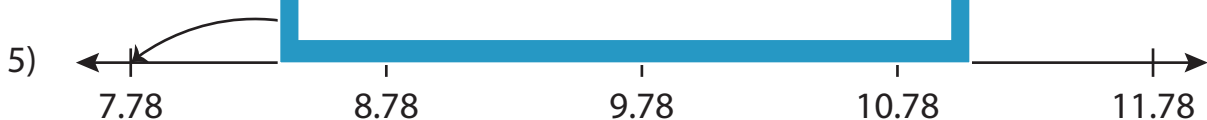
Number Line Subtraction

Sheet 5

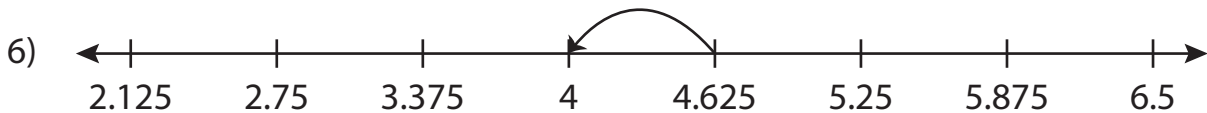
Read each number line and solve the problem.



$$4.23 - 0.738 = \underline{\hspace{2cm}}$$



$$9.78 - 2 = \underline{\hspace{2cm}}$$



$$4.625 - 0.625 = \underline{\hspace{2cm}}$$

PREVIEW

Gain complete access to the largest collection of worksheets in all subjects!

Members, please log in to download this worksheet.

Not a member? Please sign up to gain complete access.

www.mathworksheets4kids.com

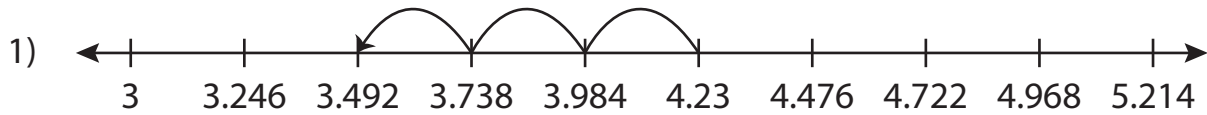
Name : _____

Answer key

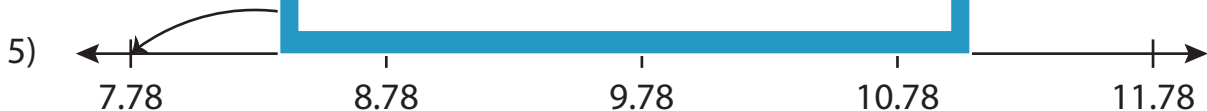
Number Line Subtraction

Sheet 5

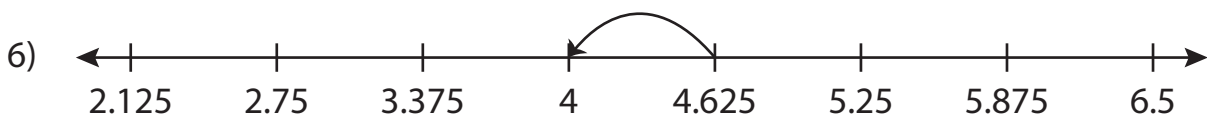
Read each number line and solve the problem.



$$4.23 - 0.738 = \underline{3.492}$$



$$9.78 - 2 = \underline{7.78}$$



$$4.625 - 0.625 = \underline{4}$$

PREVIEW

Gain complete access to the largest collection of worksheets in all subjects!

Members, please log in to download this worksheet.

Not a member? Please sign up to gain complete access.

www.mathworksheets4kids.com