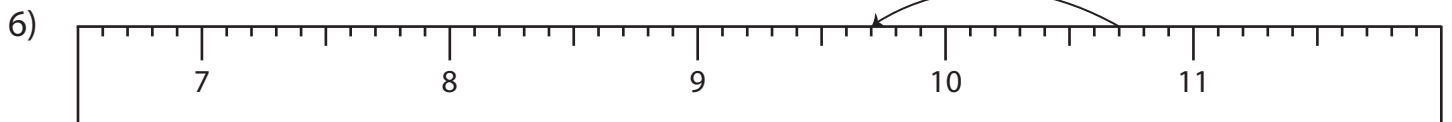
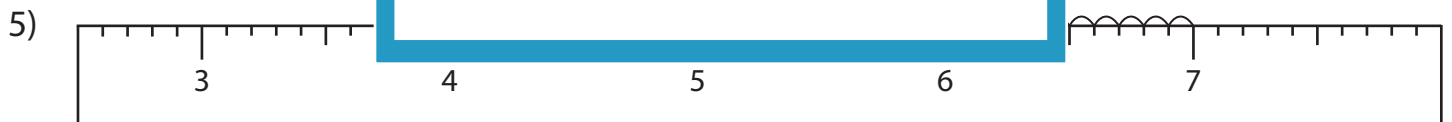
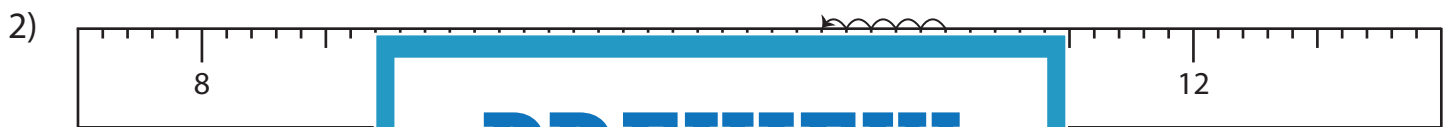
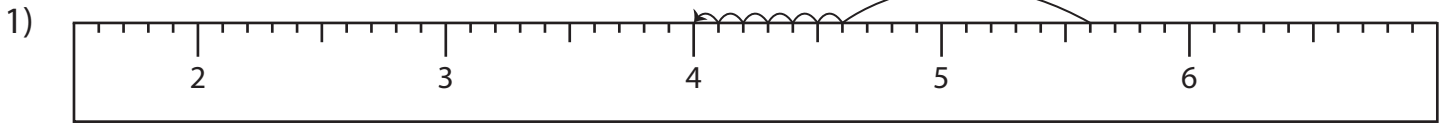


Name : _____

Subtraction Sentence - Ruler

Sheet 1

Read each ruler and write the subtraction sentences.



PREVIEW

Gain complete access to the largest collection of worksheets in all subjects!

Members, please log in to download this worksheet.

Not a member? Please sign up to gain complete access.

www.mathworksheets4kids.com

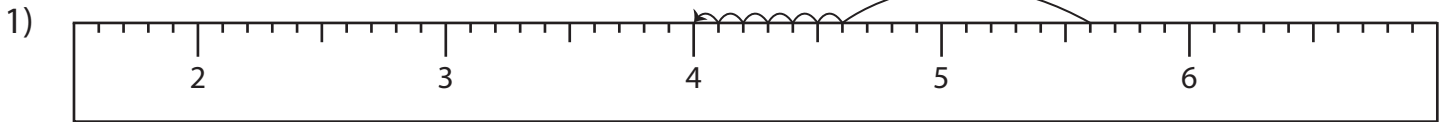
Name : _____

Answer key

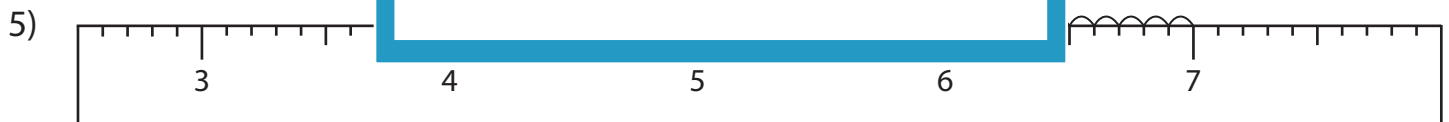
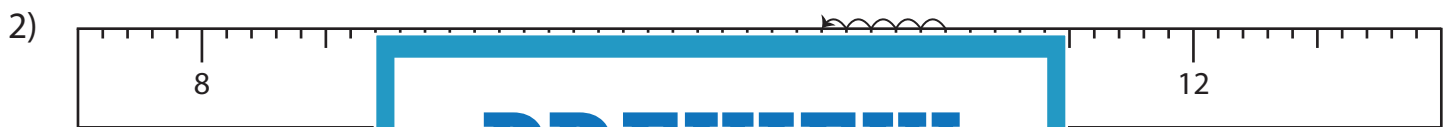
Subtraction Sentence - Ruler

Sheet 1

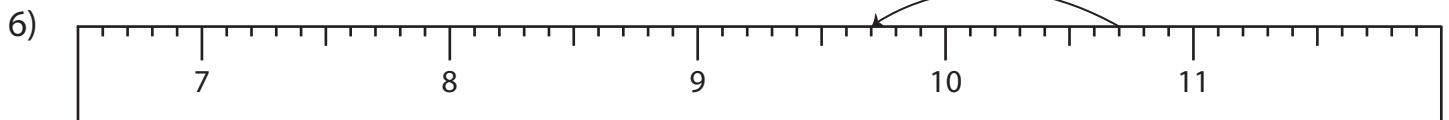
Read each ruler and write the subtraction sentences.



$$\underline{5.6} - \underline{1.6} = \underline{4}$$



$$\underline{7} - \underline{0.9} = \underline{6.1}$$



$$\underline{10.7} - \underline{1} = \underline{9.7}$$

PREVIEW

Gain complete access to the largest collection of worksheets in all subjects!

Members, please log in to download this worksheet.

Not a member? Please sign up to gain complete access.

www.mathworksheets4kids.com