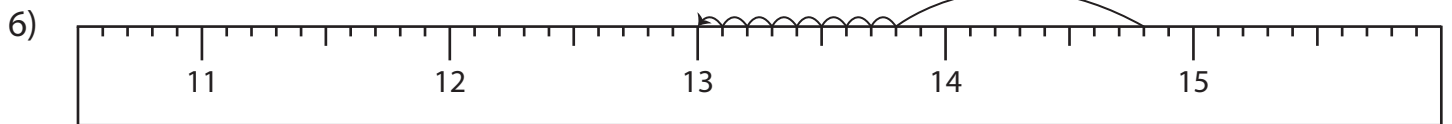
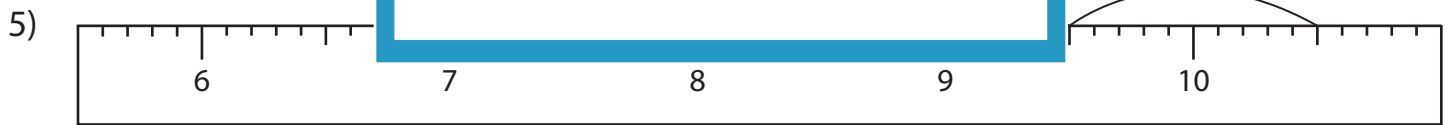
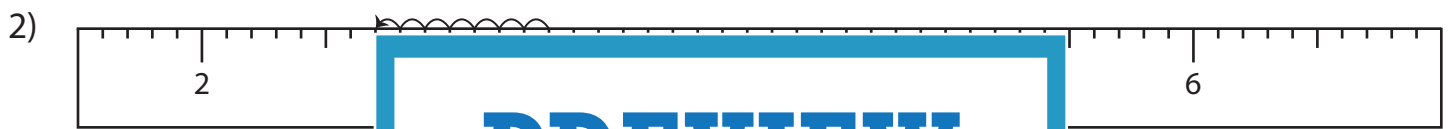
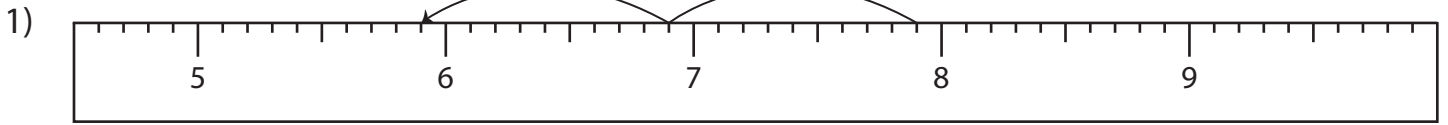


Name : \_\_\_\_\_

# Subtraction Sentence - Ruler

Sheet 2

Read each ruler and write the subtraction sentences.



# PREVIEW

Gain complete access to the largest collection of worksheets in all subjects!

Members, please log in to download this worksheet.

Not a member? Please sign up to gain complete access.

[www.mathworksheets4kids.com](http://www.mathworksheets4kids.com)

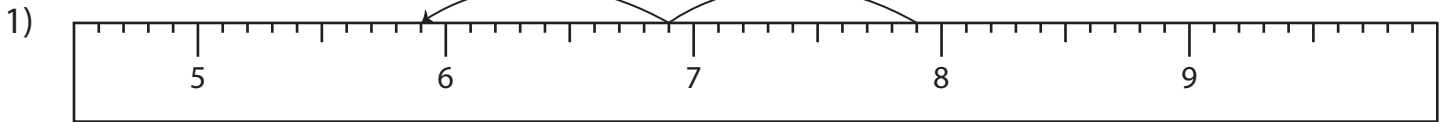
Name : \_\_\_\_\_

## Answer key

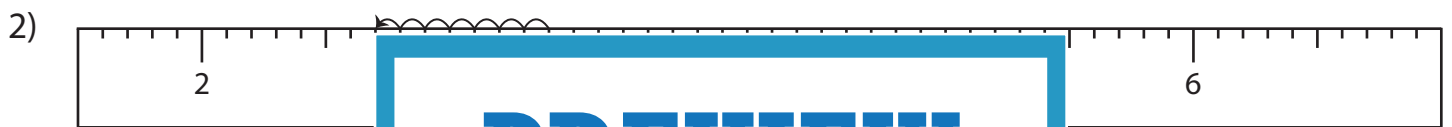
# Subtraction Sentence - Ruler

Sheet 2

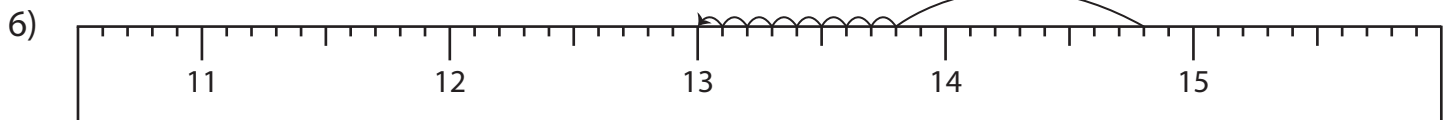
Read each ruler and write the subtraction sentences.



$$\underline{7.9} - \underline{2} = \underline{5.9}$$



$$\underline{10.5} - \underline{2.6} = \underline{7.9}$$



$$\underline{14.8} - \underline{1.8} = \underline{13}$$

**PREVIEW**

Gain complete access to the largest collection of worksheets in all subjects!

Members, please log in to download this worksheet.

Not a member? Please sign up to gain complete access.

[www.mathworksheets4kids.com](http://www.mathworksheets4kids.com)