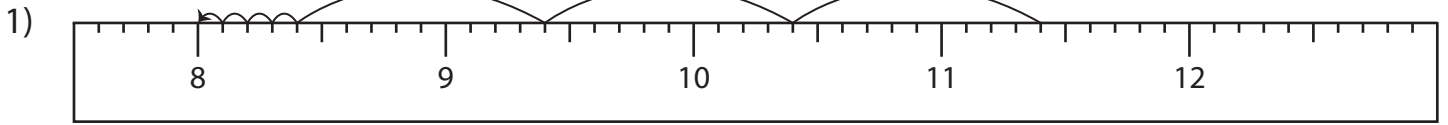


Name : _____

Subtraction Sentence - Ruler

Sheet 3

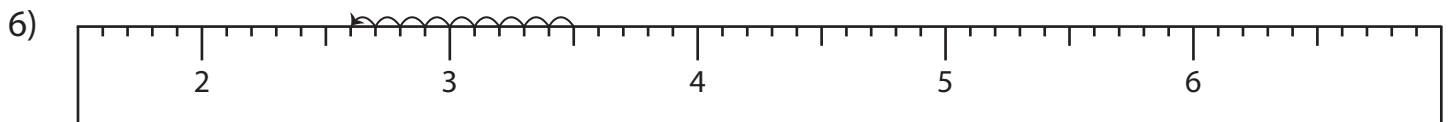
Read each ruler and write the subtraction sentences.



_____ - _____ = _____



_____ - _____ = _____



_____ - _____ = _____

PREVIEW

Gain complete access to the largest collection of worksheets in all subjects!

Members, please log in to download this worksheet.

Not a member? Please sign up to gain complete access.

www.mathworksheets4kids.com

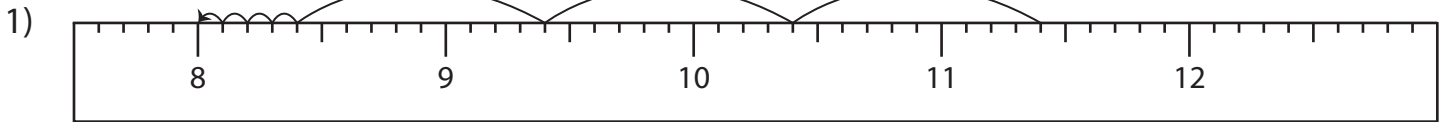
Name : _____

Answer key

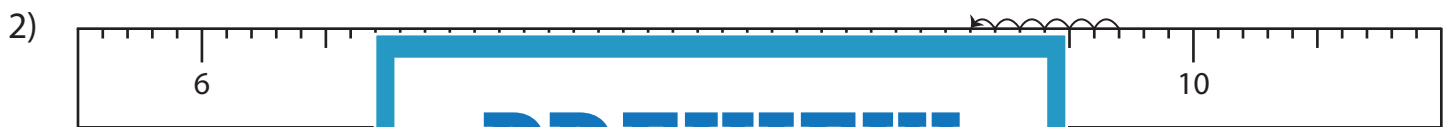
Subtraction Sentence - Ruler

Sheet 3

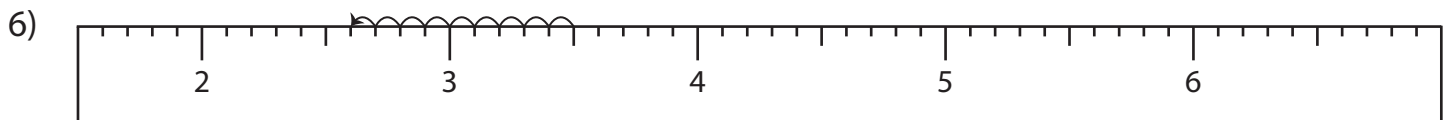
Read each ruler and write the subtraction sentences.



$$\underline{11.4} - \underline{3.4} = \underline{8}$$



$$\underline{8.1} - \underline{1.5} = \underline{6.6}$$



$$\underline{3.5} - \underline{0.9} = \underline{2.6}$$

PREVIEW

Gain complete access to the largest collection of worksheets in all subjects!

Members, please log in to download this worksheet.

Not a member? Please sign up to gain complete access.

www.mathworksheets4kids.com