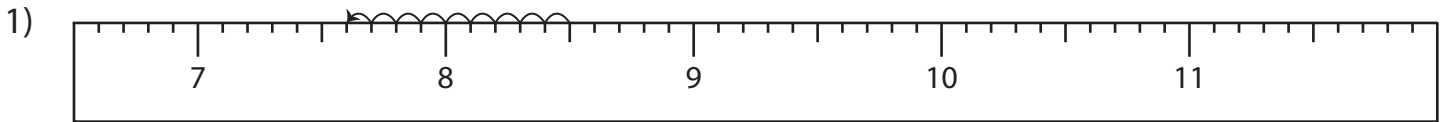


Name : \_\_\_\_\_

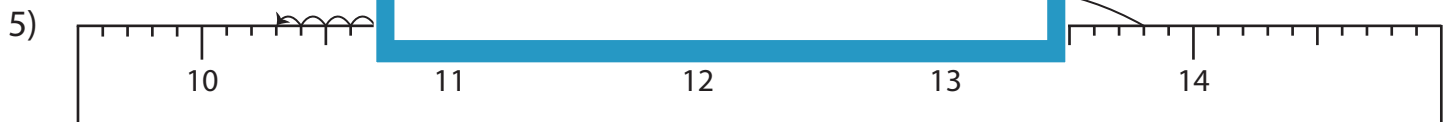
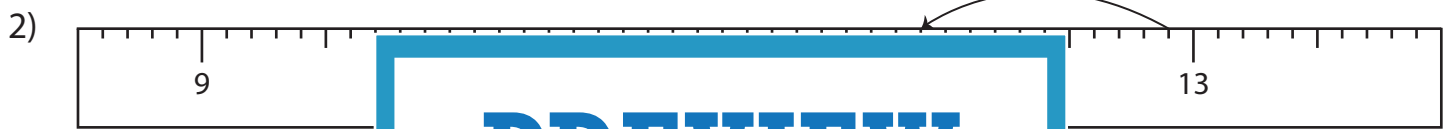
# Subtraction Sentence - Ruler

Sheet 4

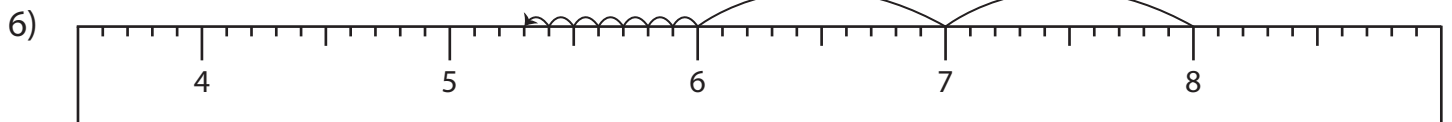
Read each ruler and write the subtraction sentences.



\_\_\_\_\_ - \_\_\_\_\_ = \_\_\_\_\_



\_\_\_\_\_ - \_\_\_\_\_ = \_\_\_\_\_



\_\_\_\_\_ - \_\_\_\_\_ = \_\_\_\_\_

**PREVIEW**

Gain complete access to the largest collection of worksheets in all subjects!

Members, please log in to download this worksheet.

Not a member? Please sign up to gain complete access.

[www.mathworksheets4kids.com](http://www.mathworksheets4kids.com)

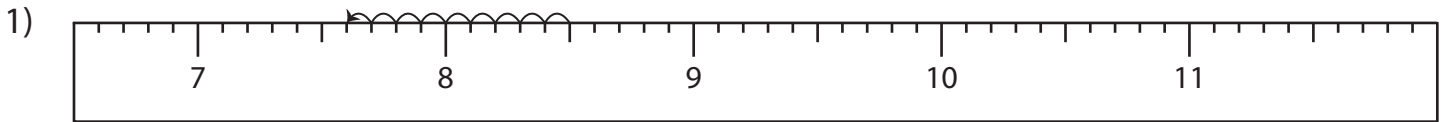
Name : \_\_\_\_\_

## Answer key

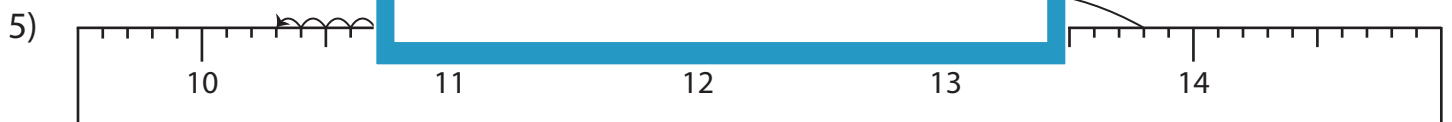
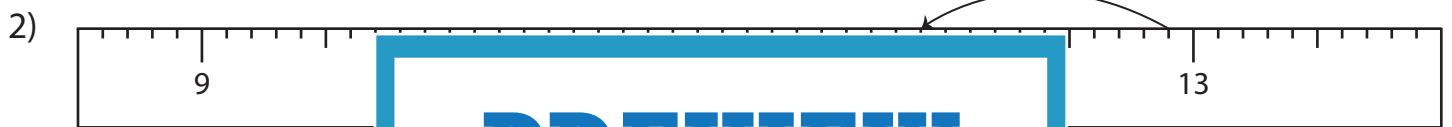
# Subtraction Sentence - Ruler

Sheet 4

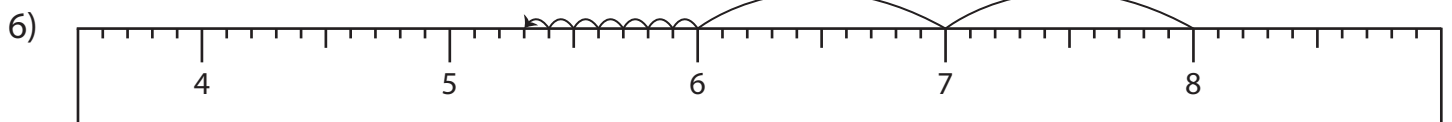
Read each ruler and write the subtraction sentences.



$$\underline{8.5} - \underline{0.9} = \underline{7.6}$$



$$\underline{13.8} - \underline{3.5} = \underline{10.3}$$



$$\underline{8} - \underline{2.7} = \underline{5.3}$$

**PREVIEW**

Gain complete access to the largest collection of worksheets in all subjects!

Members, please log in to download this worksheet.

Not a member? Please sign up to gain complete access.

[www.mathworksheets4kids.com](http://www.mathworksheets4kids.com)