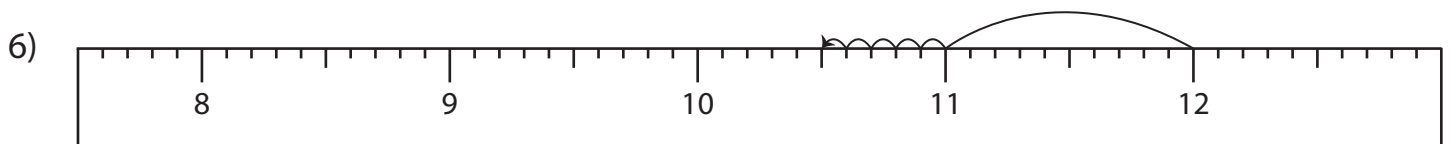
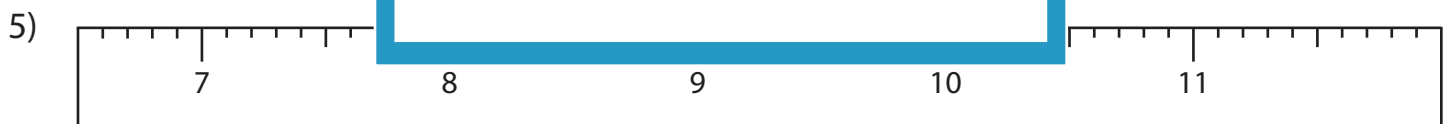
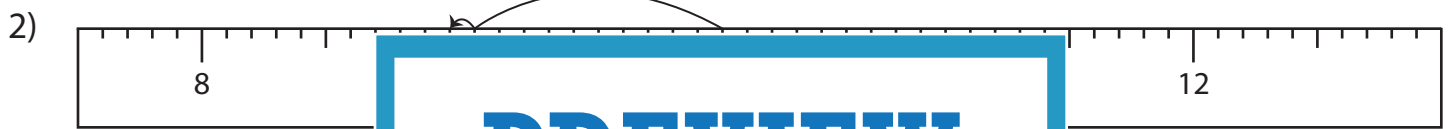
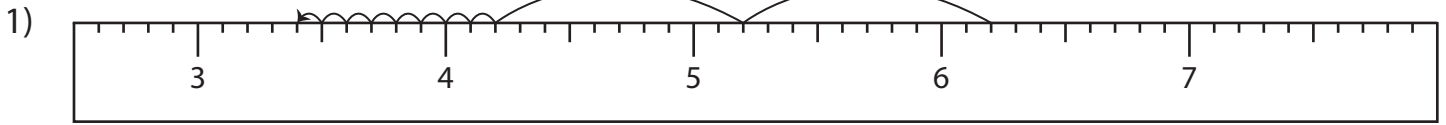


Name : _____

Subtraction Sentence - Ruler

Sheet 5

Read each ruler and write the subtraction sentences.



PREVIEW

Gain complete access to the largest collection of worksheets in all subjects!

Members, please log in to download this worksheet.

Not a member? Please sign up to gain complete access.

www.mathworksheets4kids.com

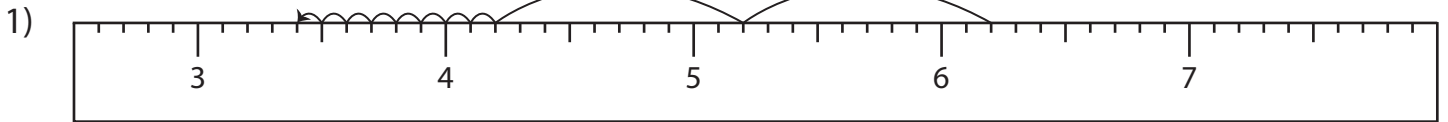
Name : _____

Answer key

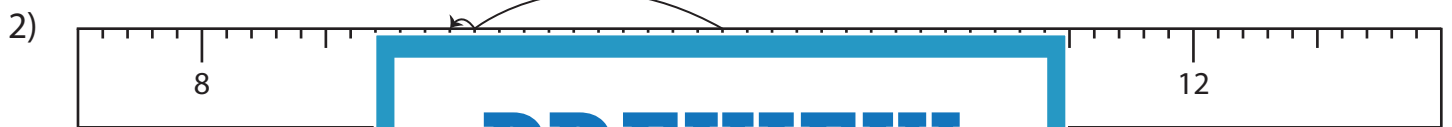
Subtraction Sentence - Ruler

Sheet 5

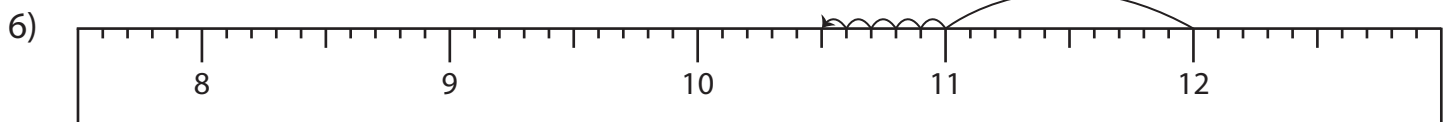
Read each ruler and write the subtraction sentences.



$$\underline{6.2} - \underline{2.8} = \underline{3.4}$$



$$\underline{9.6} - \underline{0.8} = \underline{8.8}$$



$$\underline{12} - \underline{1.5} = \underline{10.5}$$

PREVIEW

Gain complete access to the largest collection of worksheets in all subjects!

Members, please log in to download this worksheet.

Not a member? Please sign up to gain complete access.

www.mathworksheets4kids.com