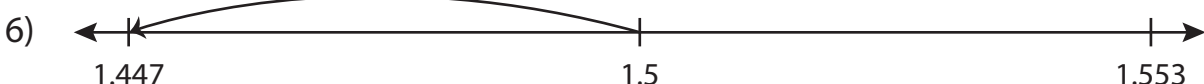
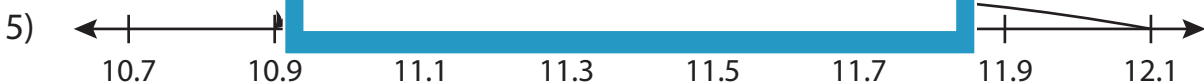
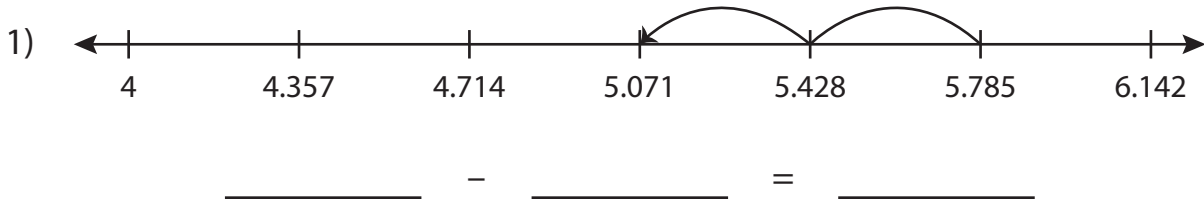


## Subtraction Sentence

Write the subtraction sentence that describes each model.



\_\_\_\_\_ - \_\_\_\_\_ = \_\_\_\_\_

\_\_\_\_\_ - \_\_\_\_\_ = \_\_\_\_\_

# PREVIEW

Gain complete access to the largest collection of worksheets in all subjects!

Members, please log in to download this worksheet.

Not a member? Please sign up to gain complete access.

[www.mathworksheets4kids.com](http://www.mathworksheets4kids.com)

Name : \_\_\_\_\_

## Answer key

Sheet 3

### Subtraction Sentence

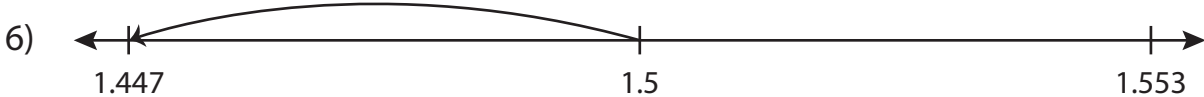
Write the subtraction sentence that describes each model.



$$\underline{5.785} - \underline{0.714} = \underline{5.071}$$



$$\underline{12.1} - \underline{1.2} = \underline{10.9}$$



$$\underline{1.5} - \underline{0.053} = \underline{1.447}$$

**PREVIEW**

Gain complete access to the largest collection of worksheets in all subjects!

Members, please log in to download this worksheet.

Not a member? Please sign up to gain complete access.

[www.mathworksheets4kids.com](http://www.mathworksheets4kids.com)