

Subtraction Sentence

Write the subtraction sentence that describes each model.



_____ - _____ = _____



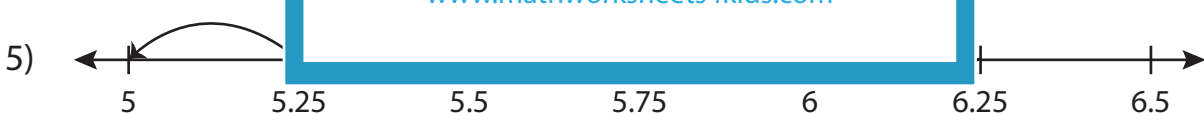
_____ - _____ = _____



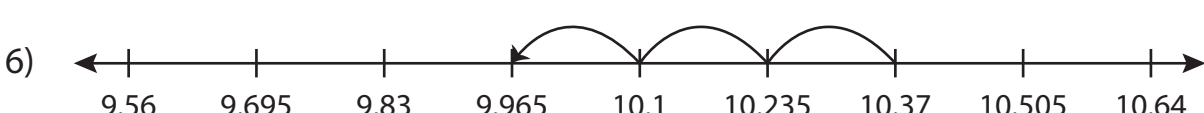
_____ - _____ = _____



_____ - _____ = _____



_____ - _____ = _____



_____ - _____ = _____

PREVIEW

Gain complete access to the largest collection of worksheets in all subjects!

Members, please log in to download this worksheet.

Not a member? Please sign up to gain complete access.

www.mathworksheets4kids.com

Name : _____

Answer key

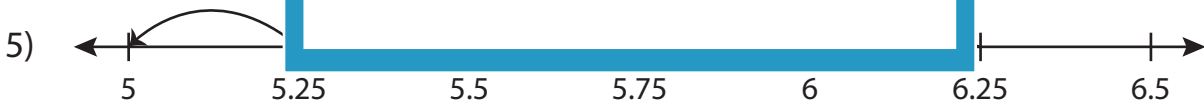
Subtraction Sentence

Sheet 5

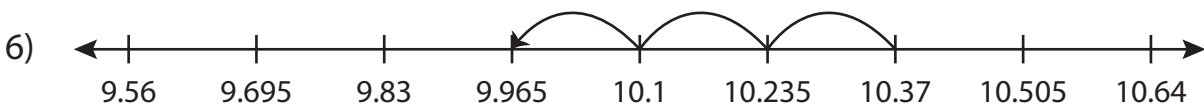
Write the subtraction sentence that describes each model.



$$\underline{8.95} - \underline{1.4} = \underline{7.55}$$



$$\underline{6.25} - \underline{1.25} = \underline{5}$$



$$\underline{10.37} - \underline{0.405} = \underline{9.965}$$

PREVIEW

Gain complete access to the largest collection of worksheets in all subjects!

Members, please log in to download this worksheet.

Not a member? Please sign up to gain complete access.

www.mathworksheets4kids.com