

Name : _____

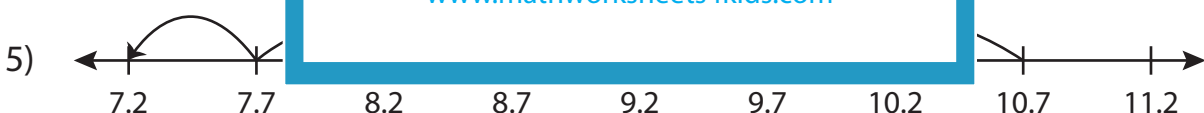
Subtraction Sentence

Tenth: S1

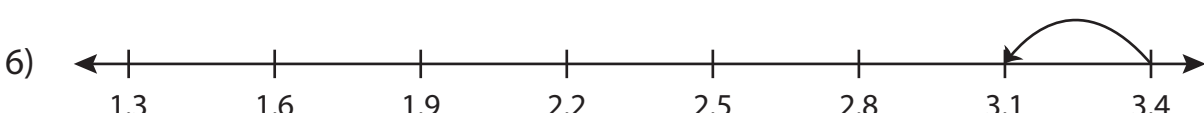
Write the subtraction sentence that describes each model.



$$\underline{\quad\quad} - \underline{\quad\quad} = \underline{\quad\quad}$$



$$\underline{\quad\quad} - \underline{\quad\quad} = \underline{\quad\quad}$$



$$\underline{\quad\quad} - \underline{\quad\quad} = \underline{\quad\quad}$$

PREVIEW

Gain complete access to the largest collection of worksheets in all subjects!

Members, please log in to download this worksheet.

Not a member? Please sign up to gain complete access.

www.mathworksheets4kids.com

Name : _____

Answer key

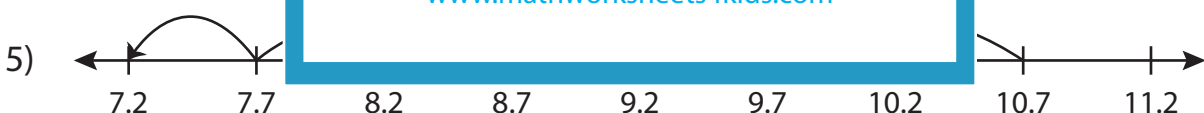
Subtraction Sentence

Tenth: S1

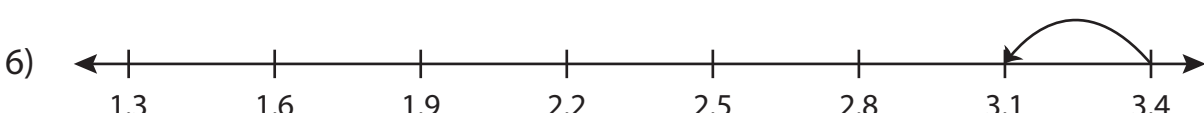
Write the subtraction sentence that describes each model.



$$\underline{7.6} - \underline{0.8} = \underline{6.8}$$



$$\underline{10.7} - \underline{3.5} = \underline{7.2}$$



$$\underline{3.4} - \underline{0.3} = \underline{3.1}$$

PREVIEW

Gain complete access to the largest collection of worksheets in all subjects!

Members, please log in to download this worksheet.

Not a member? Please sign up to gain complete access.

www.mathworksheets4kids.com