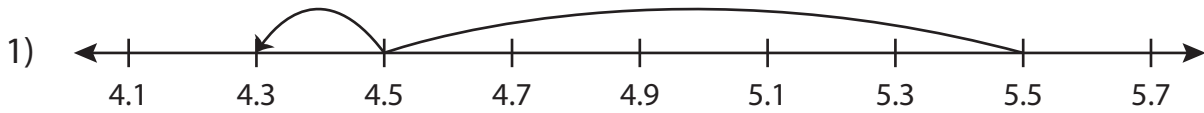


Name : \_\_\_\_\_

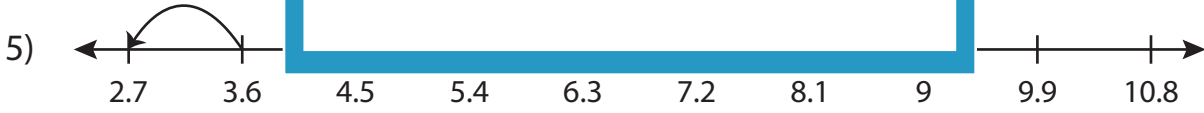
## Subtraction Sentence

Tenth: S4

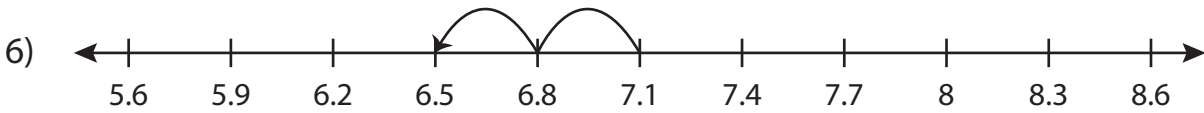
Write the subtraction sentence that describes each model.



$$\underline{\quad\quad} - \underline{\quad\quad} = \underline{\quad\quad}$$



$$\underline{\quad\quad} - \underline{\quad\quad} = \underline{\quad\quad}$$



$$\underline{\quad\quad} - \underline{\quad\quad} = \underline{\quad\quad}$$

**PREVIEW**

Gain complete access to the largest collection of worksheets in all subjects!

Members, please log in to download this worksheet.

Not a member? Please sign up to gain complete access.

[www.mathworksheets4kids.com](http://www.mathworksheets4kids.com)

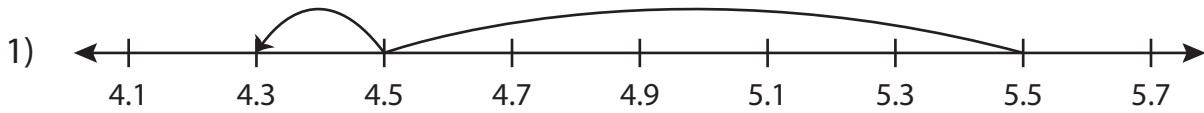
Name : \_\_\_\_\_

## Answer key


### Subtraction Sentence

Tenth: S4

Write the subtraction sentence that describes each model.



$$\underline{5.5} - \underline{1.2} = \underline{4.3}$$



$$\underline{3.6} - \underline{0.9} = \underline{2.7}$$



$$\underline{7.1} - \underline{0.6} = \underline{6.5}$$

**PREVIEW**

Gain complete access to the largest collection of worksheets in all subjects!

Members, please log in to download this worksheet.

Not a member? Please sign up to gain complete access.

[www.mathworksheets4kids.com](http://www.mathworksheets4kids.com)