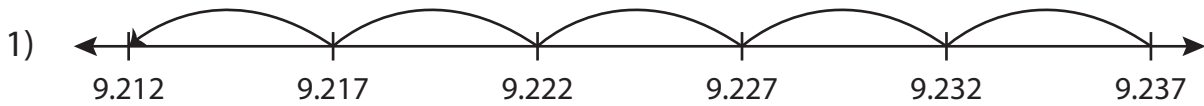


Name : _____

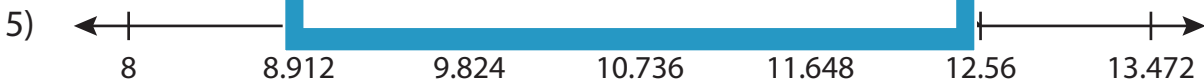
Subtraction Sentence

Thousandth: S3

Write the subtraction sentence that describes each model.



$$\underline{\hspace{2cm}} - \underline{\hspace{2cm}} = \underline{\hspace{2cm}}$$



$$\underline{\hspace{2cm}} - \underline{\hspace{2cm}} = \underline{\hspace{2cm}}$$



$$\underline{\hspace{2cm}} - \underline{\hspace{2cm}} = \underline{\hspace{2cm}}$$

PREVIEW

Gain complete access to the largest collection of worksheets in all subjects!

Members, please log in to download this worksheet.

Not a member? Please sign up to gain complete access.

www.mathworksheets4kids.com

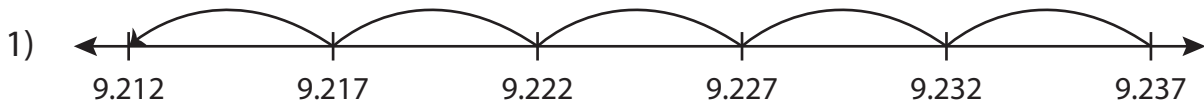
Name : _____

Answer key

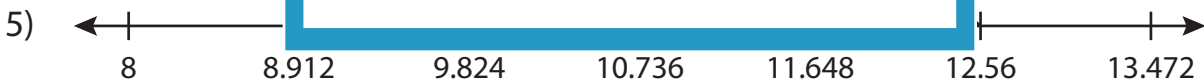
Subtraction Sentence

Thousandth: S3

Write the subtraction sentence that describes each model.



$$\underline{9.237} - \underline{0.025} = \underline{9.212}$$



$$\underline{12.56} - \underline{0.912} = \underline{11.648}$$



$$\underline{3.66} - \underline{0.175} = \underline{3.485}$$

PREVIEW

Gain complete access to the largest collection of worksheets in all subjects!

Members, please log in to download this worksheet.

Not a member? Please sign up to gain complete access.

www.mathworksheets4kids.com