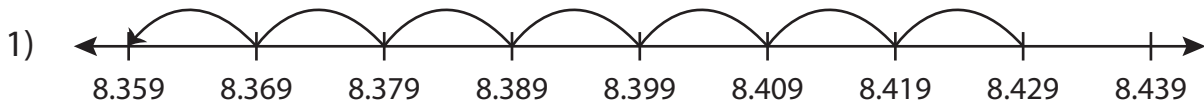


Name : _____

Subtraction Sentence

Thousandth: S4

Write the subtraction sentence that describes each model.



_____ - _____ = _____



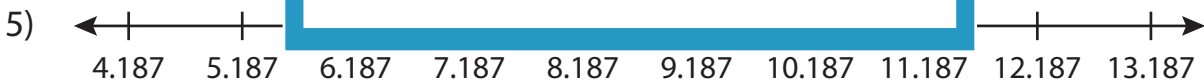
_____ - _____ = _____



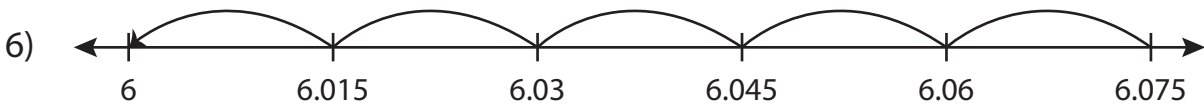
_____ - _____ = _____



_____ - _____ = _____



_____ - _____ = _____



_____ - _____ = _____

PREVIEW

Gain complete access to the largest collection of worksheets in all subjects!

Members, please log in to download this worksheet.

Not a member? Please sign up to gain complete access.

www.mathworksheets4kids.com

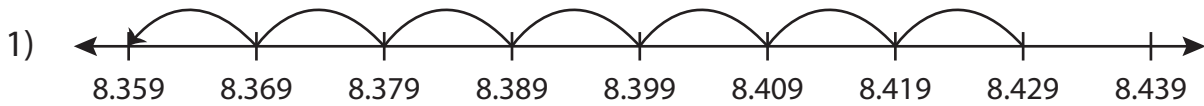
Name : _____

Answer key

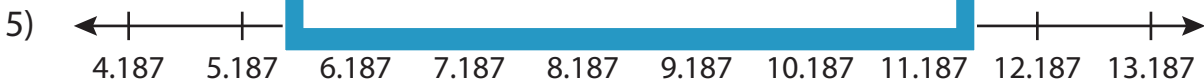
Subtraction Sentence

Thousandth: S4

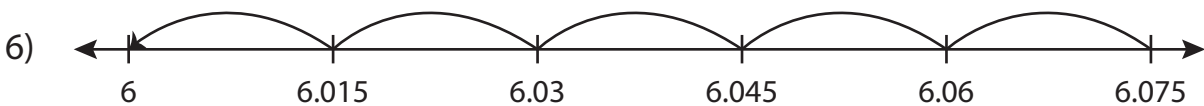
Write the subtraction sentence that describes each model.



$$\underline{8.429} - \underline{0.07} = \underline{8.359}$$



$$\underline{11.187} - \underline{4} = \underline{7.187}$$



$$\underline{6.075} - \underline{0.075} = \underline{6}$$

PREVIEW

Gain complete access to the largest collection of worksheets in all subjects!

Members, please log in to download this worksheet.

Not a member? Please sign up to gain complete access.

www.mathworksheets4kids.com