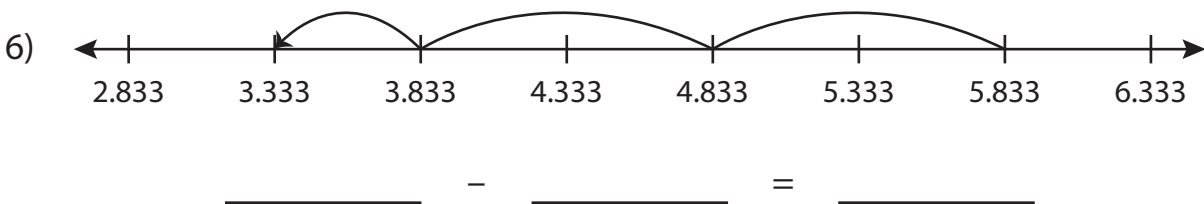
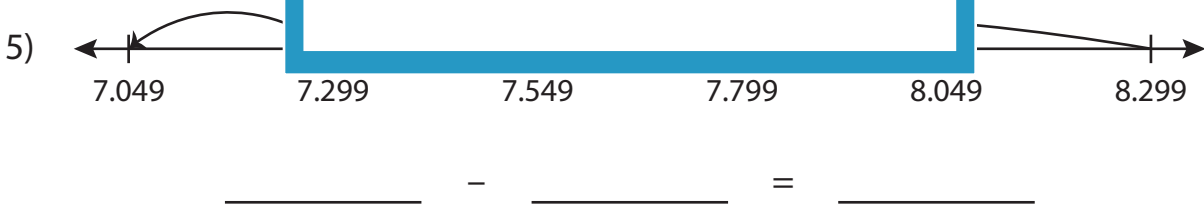
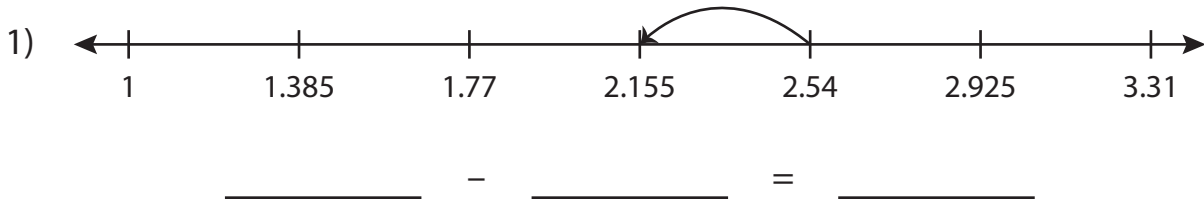


Name : _____

Subtraction Sentence

Thousandth: S5

Write the subtraction sentence that describes each model.



PREVIEW

Gain complete access to the largest collection of worksheets in all subjects!

Members, please log in to download this worksheet.

Not a member? Please sign up to gain complete access.

www.mathworksheets4kids.com

Name : _____

Answer key

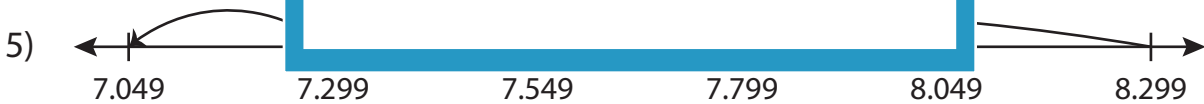
Subtraction Sentence

Thousandth: S5

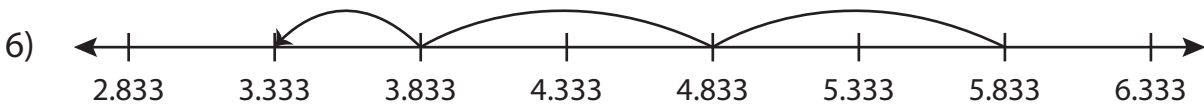
Write the subtraction sentence that describes each model.



$$\underline{2.54} - \underline{0.385} = \underline{2.155}$$



$$\underline{8.299} - \underline{1.25} = \underline{7.049}$$



$$\underline{5.833} - \underline{2.5} = \underline{3.333}$$

PREVIEW

Gain complete access to the largest collection of worksheets in all subjects!

Members, please log in to download this worksheet.

Not a member? Please sign up to gain complete access.

www.mathworksheets4kids.com