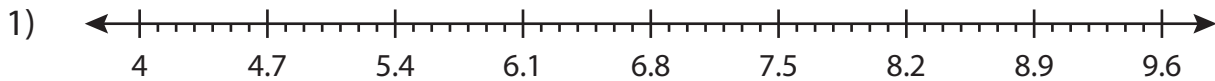


Name : \_\_\_\_\_

# Decimal Subtraction

Tenth: S1

Solve using number line.



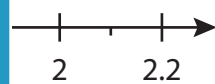
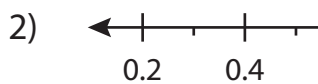
a)  $7.5 - 2.1 = \underline{\hspace{2cm}}$

b)  $4.7 - 0.7 = \underline{\hspace{2cm}}$

c)  $9.6 - 1. \underline{\hspace{1cm}} = \underline{\hspace{2cm}}$

e)  $8.9 - 3. \underline{\hspace{1cm}} = \underline{\hspace{2cm}}$

g)  $6.4 - 0. \underline{\hspace{1cm}} = \underline{\hspace{2cm}}$



a) 
$$\begin{array}{r} 1.8 \\ - 0.6 \\ \hline \end{array}$$

d) 
$$\begin{array}{r} 1.7 \\ - 1.4 \\ \hline \end{array}$$

e) 
$$\begin{array}{r} 1.5 \\ - 1.3 \\ \hline \end{array}$$

f) 
$$\begin{array}{r} 2.2 \\ - 0.9 \\ \hline \end{array}$$

g) 
$$\begin{array}{r} 0.9 \\ - 0.5 \\ \hline \end{array}$$

h) 
$$\begin{array}{r} 1.3 \\ - 0.3 \\ \hline \end{array}$$

i) 
$$\begin{array}{r} 2.1 \\ - 1.1 \\ \hline \end{array}$$

j) 
$$\begin{array}{r} 1.9 \\ - 0.1 \\ \hline \end{array}$$

k) 
$$\begin{array}{r} 1.6 \\ - 0.7 \\ \hline \end{array}$$

l) 
$$\begin{array}{r} 2.2 \\ - 0.8 \\ \hline \end{array}$$

**PREVIEW**

Gain complete access to the largest collection of worksheets in all subjects!

Members, please log in to download this worksheet.

Not a member? Please sign up to gain complete access.

[www.mathworksheets4kids.com](http://www.mathworksheets4kids.com)

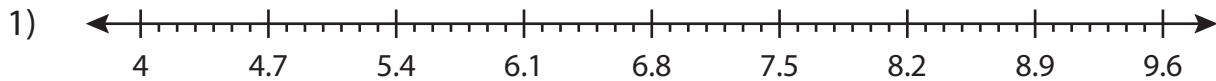
Name : \_\_\_\_\_

## Answer key

# Decimal Subtraction

Tenth: S1

Solve using number line.



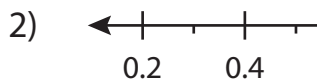
a)  $7.5 - 2.1 = \underline{5.4}$

b)  $4.7 - 0.7 = \underline{4}$

c)  $9.6 - 1. = \underline{6.3}$

e)  $8.9 - 3. = \underline{4.1}$

g)  $6.4 - 0. = \underline{4.6}$



a) 
$$\begin{array}{r} 1.8 \\ - 0.6 \\ \hline 1.2 \end{array}$$

e) 
$$\begin{array}{r} 1.5 \\ - 1.3 \\ \hline 0.2 \end{array}$$

i) 
$$\begin{array}{r} 2.1 \\ - 1.1 \\ \hline 1.0 \end{array}$$

Members, please  
log in to  
download this  
worksheet.

Not a member?  
Please sign up to  
gain complete  
access.

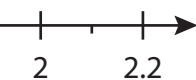
[www.mathworksheets4kids.com](http://www.mathworksheets4kids.com)

f) 
$$\begin{array}{r} 2.2 \\ - 0.9 \\ \hline 1.3 \end{array}$$

j) 
$$\begin{array}{r} 1.9 \\ - 0.1 \\ \hline 1.8 \end{array}$$

g) 
$$\begin{array}{r} 0.9 \\ - 0.5 \\ \hline 0.4 \end{array}$$

k) 
$$\begin{array}{r} 1.6 \\ - 0.7 \\ \hline 0.9 \end{array}$$



d) 
$$\begin{array}{r} 1.7 \\ - 1.4 \\ \hline 0.3 \end{array}$$

h) 
$$\begin{array}{r} 1.3 \\ - 0.3 \\ \hline 1.0 \end{array}$$

l) 
$$\begin{array}{r} 2.2 \\ - 0.8 \\ \hline 1.4 \end{array}$$