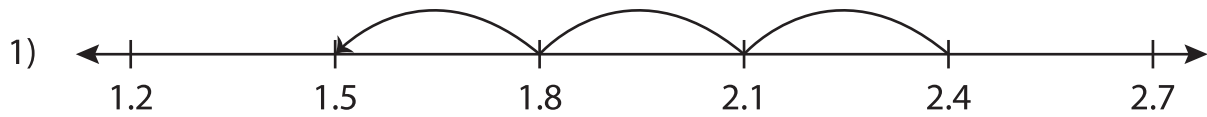


Name : _____

Number Line Subtraction

Tenth: S1

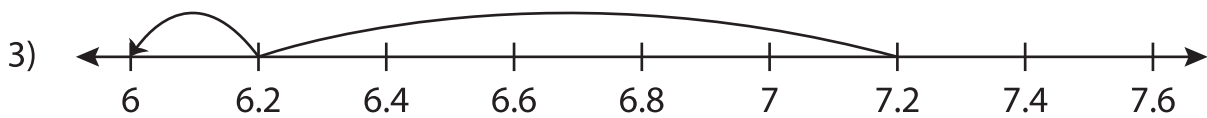
Read each number line and solve the problem.



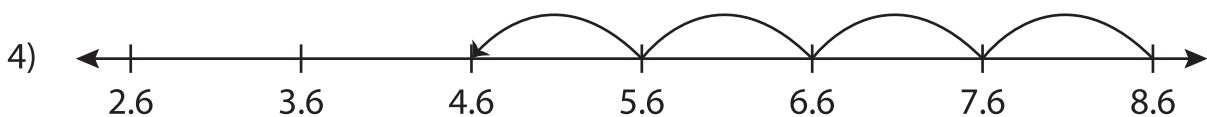
$$2.4 - 0.9 = \underline{\hspace{2cm}}$$



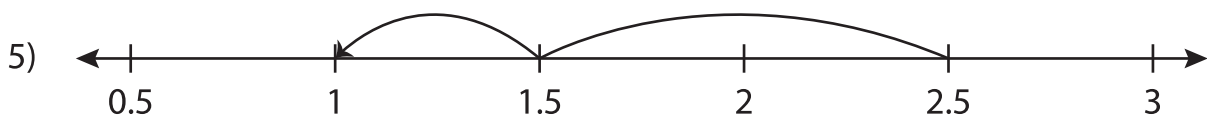
$$4.1 - 0.5 = \underline{\hspace{2cm}}$$



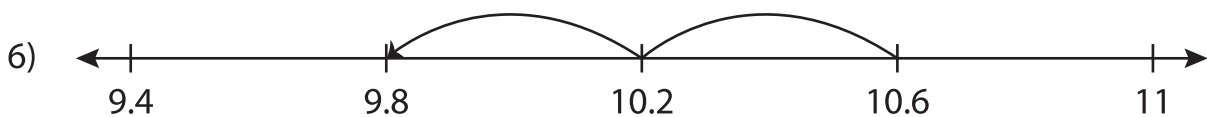
$$7.2 - 1.2 = \underline{\hspace{2cm}}$$



$$8.6 - 4 = \underline{\hspace{2cm}}$$



$$2.5 - 1.5 = \underline{\hspace{2cm}}$$



$$10.6 - 0.8 = \underline{\hspace{2cm}}$$