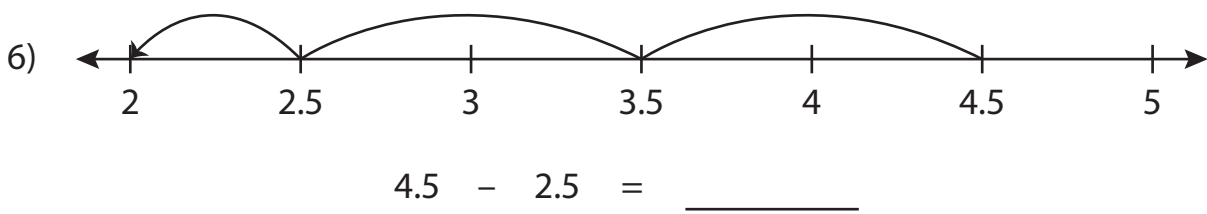
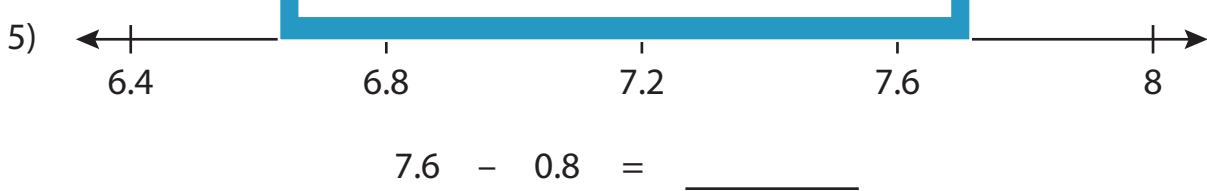
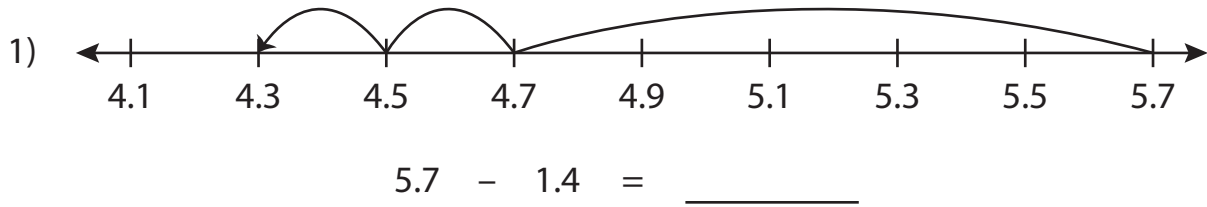


Name : _____

Number Line Subtraction

Tenth: S2

Read each number line and solve the problem.



PREVIEW

Gain complete access to the largest collection of worksheets in all subjects!

Members, please log in to download this worksheet.

Not a member? Please sign up to gain complete access.

www.mathworksheets4kids.com

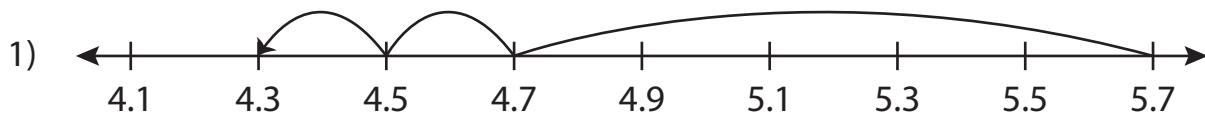
Name : _____

Answer key

Number Line Subtraction

Tenth: S2

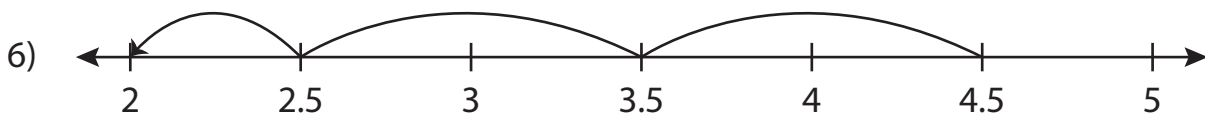
Read each number line and solve the problem.



$$5.7 - 1.4 = \underline{4.3}$$



$$7.6 - 0.8 = \underline{6.8}$$



$$4.5 - 2.5 = \underline{2}$$

PREVIEW

Gain complete access to the largest collection of worksheets in all subjects!

Members, please log in to download this worksheet.

Not a member? Please sign up to gain complete access.

www.mathworksheets4kids.com