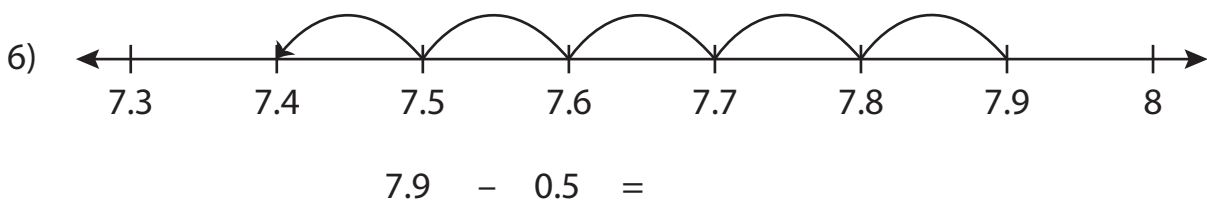
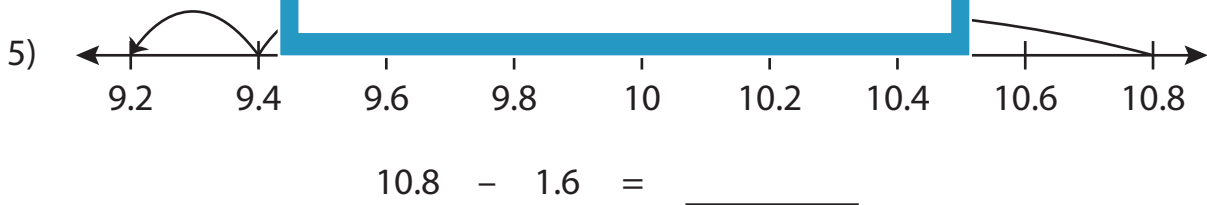
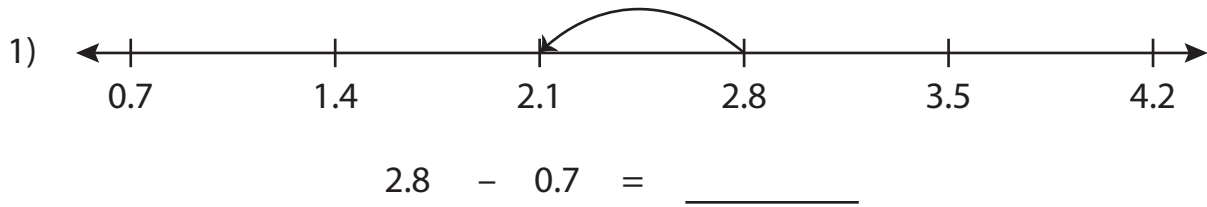


Name : \_\_\_\_\_

# Number Line Subtraction

Tenth: S3

Read each number line and solve the problem.



**PREVIEW**

Gain complete access to the largest collection of worksheets in all subjects!

Members, please log in to download this worksheet.

Not a member? Please sign up to gain complete access.

[www.mathworksheets4kids.com](http://www.mathworksheets4kids.com)

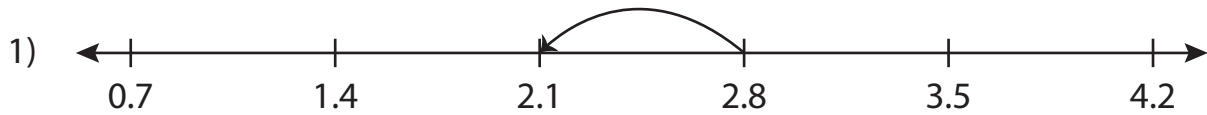
Name : \_\_\_\_\_

## Answer key

# Number Line Subtraction

Tenth: S3

Read each number line and solve the problem.



$$2.8 - 0.7 = \underline{2.1}$$



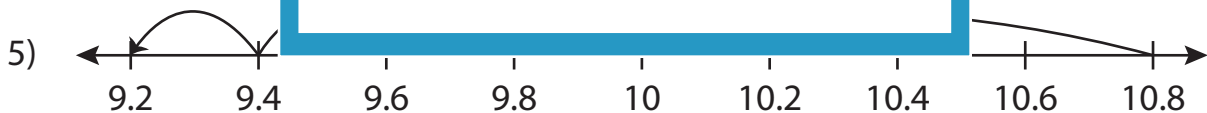
# PREVIEW

Gain complete access to the largest collection of worksheets in all subjects!

Members, please log in to download this worksheet.

Not a member? Please sign up to gain complete access.

[www.mathworksheets4kids.com](http://www.mathworksheets4kids.com)



$$10.8 - 1.6 = \underline{9.2}$$



$$7.9 - 0.5 = \underline{7.4}$$