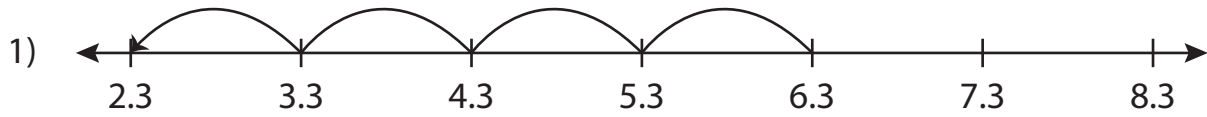


Name : \_\_\_\_\_

# Number Line Subtraction

Tenth: S4

Read each number line and solve the problem.



$$6.3 - 4 = \underline{\hspace{2cm}}$$



# PREVIEW

Gain complete access to the largest collection of worksheets in all subjects!

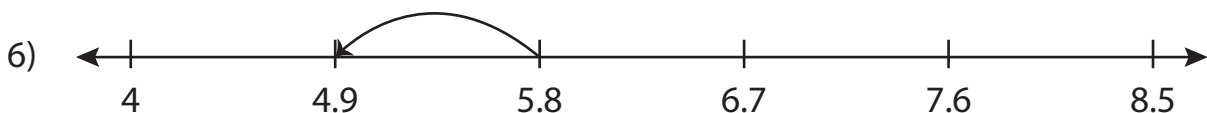
Members, please log in to download this worksheet.

Not a member? Please sign up to gain complete access.

[www.mathworksheets4kids.com](http://www.mathworksheets4kids.com)



$$7 - 3.5 = \underline{\hspace{2cm}}$$



$$5.8 - 0.9 = \underline{\hspace{2cm}}$$

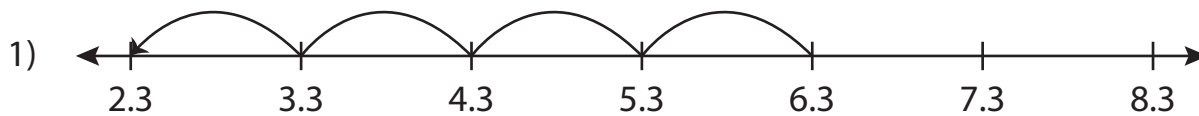
Name : \_\_\_\_\_

## Answer key

# Number Line Subtraction

Tenth: S4

Read each number line and solve the problem.



$$6.3 - 4 = \underline{2.3}$$



# PREVIEW

Gain complete access to the largest collection of worksheets in all subjects!

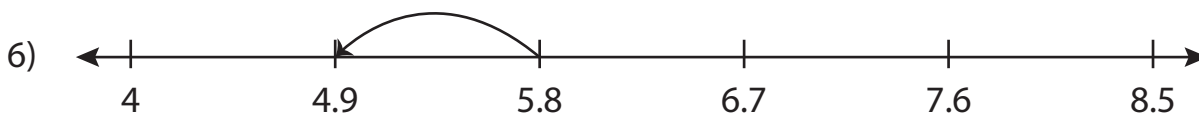
Members, please log in to download this worksheet.

Not a member? Please sign up to gain complete access.

[www.mathworksheets4kids.com](http://www.mathworksheets4kids.com)



$$7 - 3.5 = \underline{3.5}$$



$$5.8 - 0.9 = \underline{4.9}$$