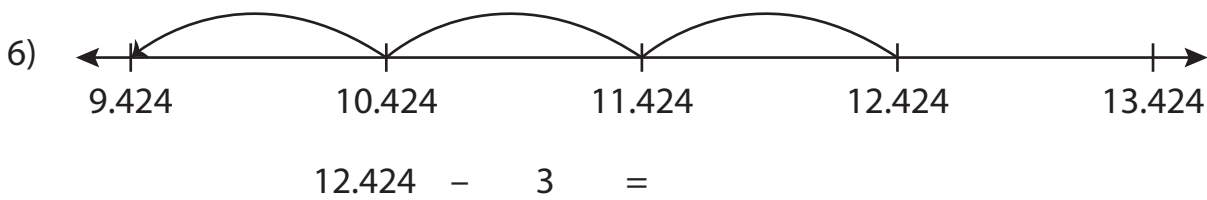
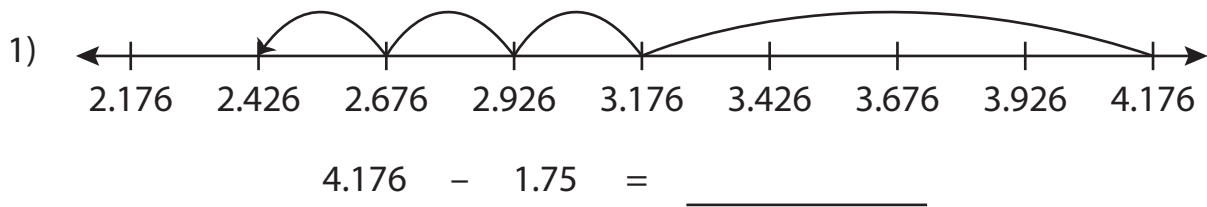


Name: _____

Number Line Subtraction

Thousandth: S1

Read each number line and solve the problem.



PREVIEW

Gain complete access to the largest collection of worksheets in all subjects!

Members, please log in to download this worksheet.

Not a member? Please sign up to gain complete access.

www.mathworksheets4kids.com

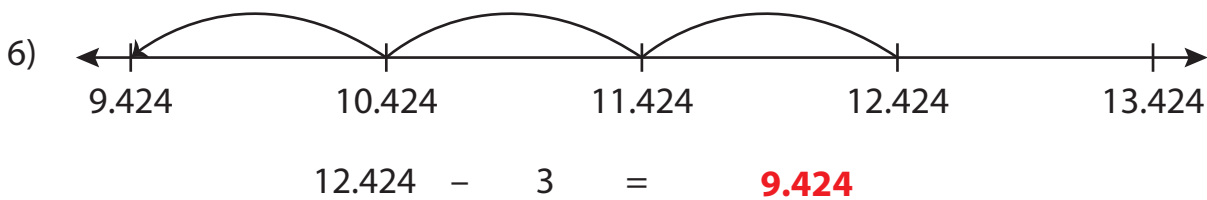
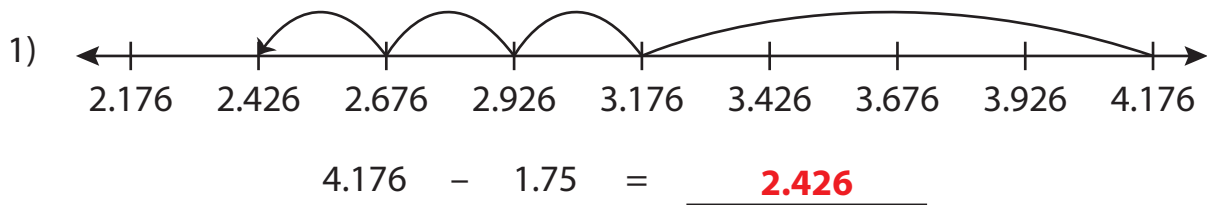
Name: _____

Answer key

Number Line Subtraction

Thousandth: S1

Read each number line and solve the problem.



PREVIEW

Gain complete access to the largest collection of worksheets in all subjects!

Members, please log in to download this worksheet.

Not a member? Please sign up to gain complete access.

www.mathworksheets4kids.com