

Name : _____

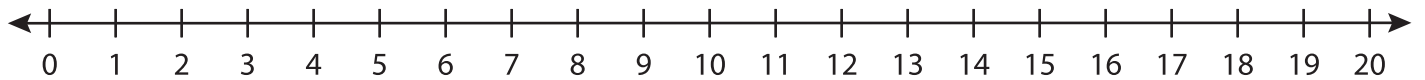
Score : _____

Number Line Division

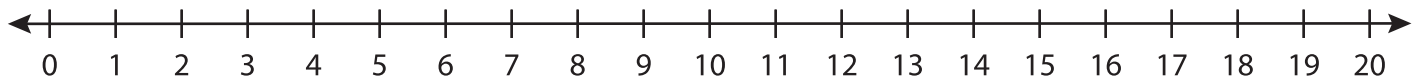
T1S1

Indicate hops on each number line and complete the division sentences.

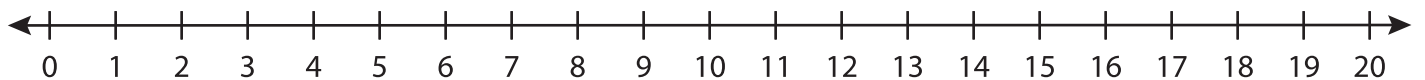
1) $20 \div 5 =$ _____



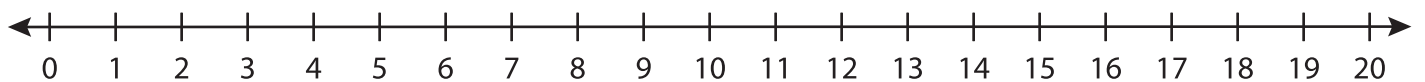
2) $18 \div 9 =$ _____



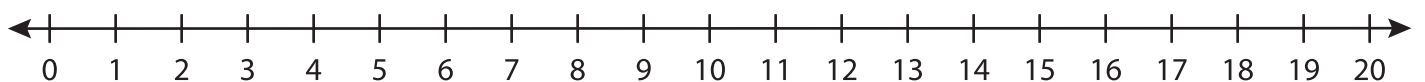
3) $12 \div 4 =$ _____



4) $16 \div 2 =$ _____



5) $15 \div 3 =$ _____



6) $9 \div 1 =$ _____

