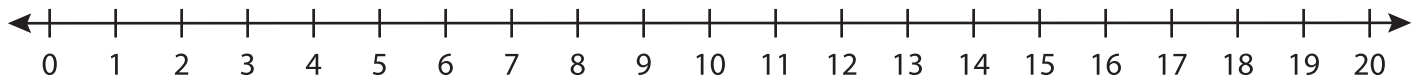


# Number Line Division

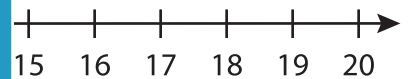
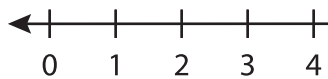
T1S2

Indicate hops on each number line and complete the division sentences.

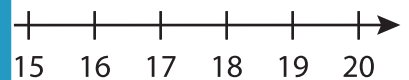
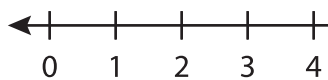
1)  $14 \div 2 =$  \_\_\_\_\_



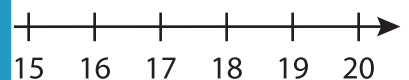
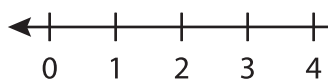
2)  $8 \div 8 =$  \_\_\_\_\_



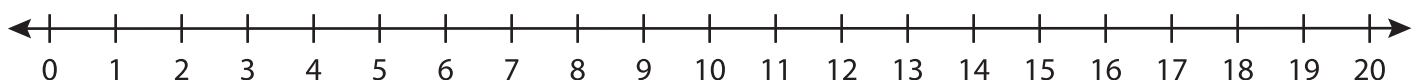
3)  $15 \div 5 =$  \_\_\_\_\_



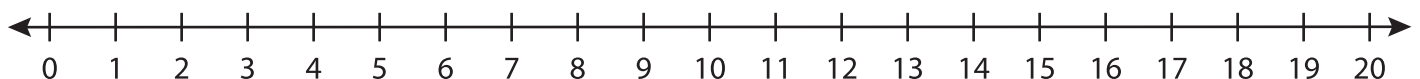
4)  $20 \div 2 =$  \_\_\_\_\_



5)  $16 \div 4 =$  \_\_\_\_\_



6)  $12 \div 6 =$  \_\_\_\_\_



# PREVIEW

Gain complete access to the largest  
collection of worksheets in all subjects!

Members, please  
log in to  
download this  
worksheet.

Not a member?  
Please sign up to  
gain complete  
access.

[www.mathworksheets4kids.com](http://www.mathworksheets4kids.com)