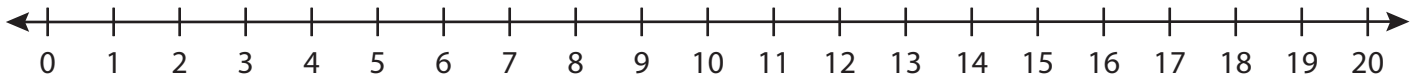


# Number Line Division

T1S3

Indicate hops on each number line and complete the division sentences.

1)  $9 \div 3 =$  \_\_\_\_\_



2)  $16 \div 8 =$  \_\_\_\_\_



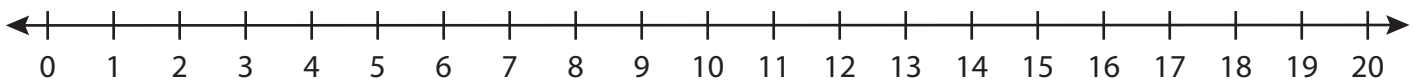
3)  $12 \div 3 =$  \_\_\_\_\_



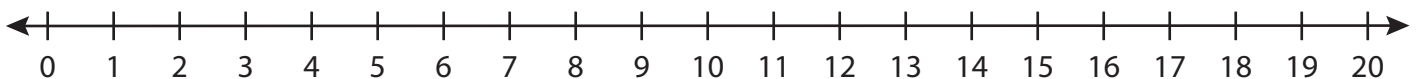
4)  $7 \div 1 =$  \_\_\_\_\_



5)  $18 \div 6 =$  \_\_\_\_\_



6)  $20 \div 4 =$  \_\_\_\_\_



# PREVIEW

Gain complete access to the largest  
collection of worksheets in all subjects!

Members, please  
log in to  
download this  
worksheet.

Not a member?  
Please sign up to  
gain complete  
access.

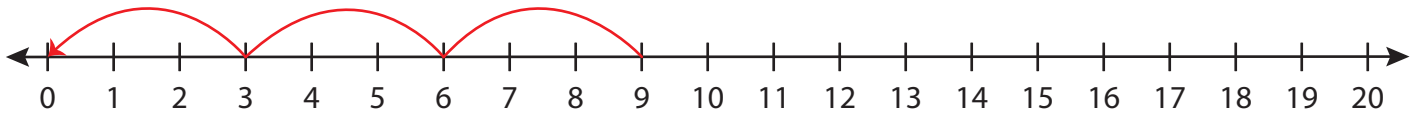
[www.mathworksheets4kids.com](http://www.mathworksheets4kids.com)

# Number Line Division

T1S3

Indicate hops on each number line and complete the division sentences.

1)  $9 \div 3 = \underline{3}$



2)  $16 \div 8 = \underline{\quad}$



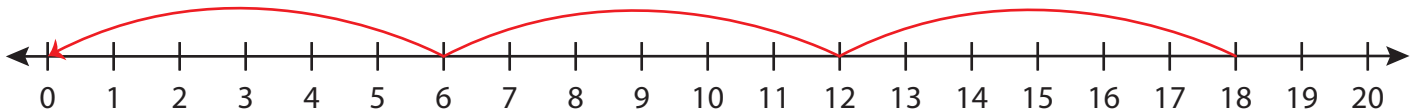
3)  $12 \div 3 = \underline{\quad}$



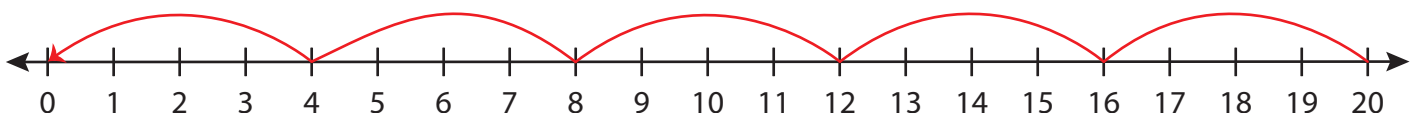
4)  $7 \div 1 = \underline{\quad}$



5)  $18 \div 6 = \underline{\quad}$



6)  $20 \div 4 = \underline{5}$



# PREVIEW

Gain complete access to the largest  
collection of worksheets in all subjects!

Members, please  
log in to  
download this  
worksheet.

Not a member?  
Please sign up to  
gain complete  
access.

[www.mathworksheets4kids.com](http://www.mathworksheets4kids.com)