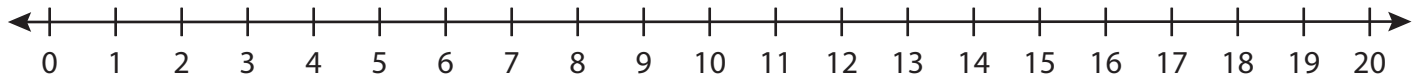


Number Line Division

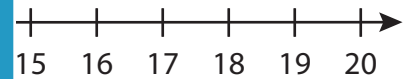
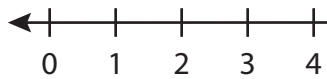
T1S4

Indicate hops on each number line and complete the division sentences.

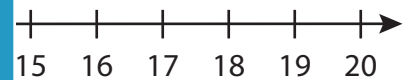
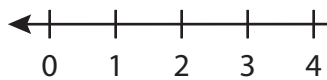
1) $18 \div 2 =$ _____



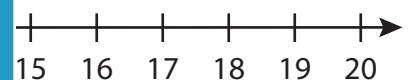
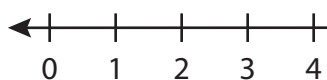
2) $3 \div 3 =$ _____



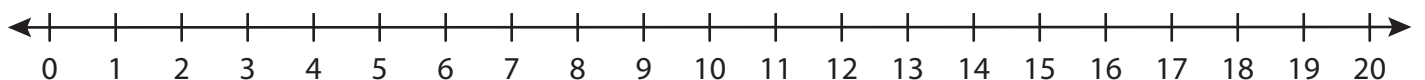
3) $14 \div 7 =$ _____



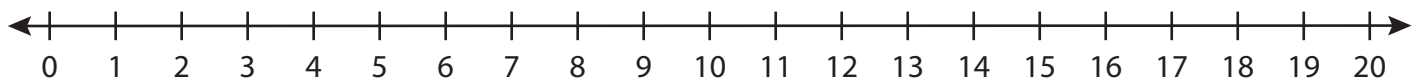
4) $5 \div 5 =$ _____



5) $8 \div 4 =$ _____



6) $6 \div 1 =$ _____



PREVIEW

Gain complete access to the largest collection of worksheets in all subjects!

Members, please log in to download this worksheet.

Not a member? Please sign up to gain complete access.

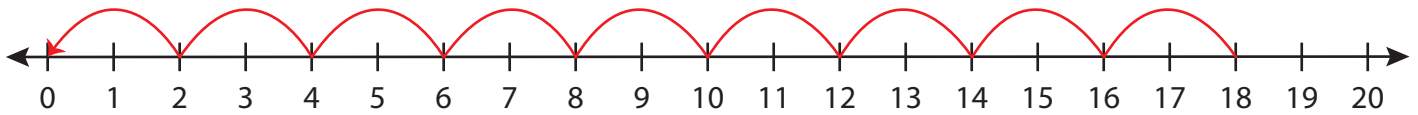
www.mathworksheets4kids.com

Number Line Division

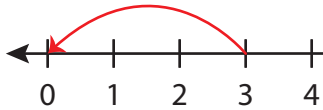
T1S4

Indicate hops on each number line and complete the division sentences.

1) $18 \div 2 = \underline{9}$



2) $3 \div 3 = \underline{\quad}$



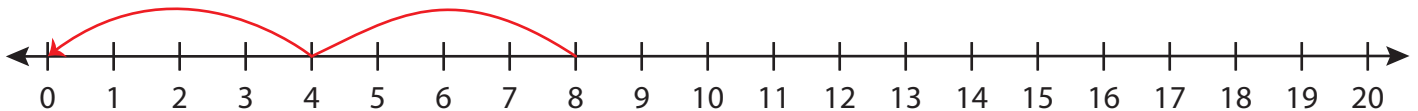
3) $14 \div 7 = \underline{\quad}$



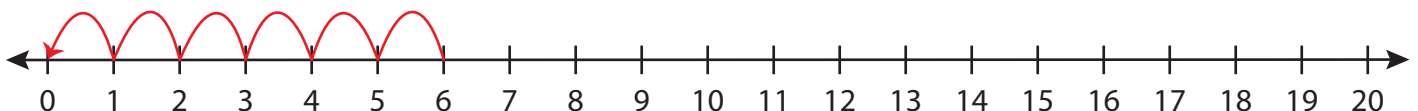
4) $5 \div 5 = \underline{\quad}$



5) $8 \div 4 = \underline{\quad}$



6) $6 \div 1 = \underline{6}$



PREVIEW

Gain complete access to the largest collection of worksheets in all subjects!

Members, please log in to download this worksheet.

Not a member? Please sign up to gain complete access.

www.mathworksheets4kids.com

