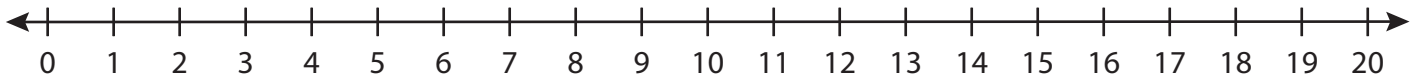


# Number Line Division

T1S5

Indicate hops on each number line and complete the division sentences.

1)  $12 \div 2 =$  \_\_\_\_\_



2)  $20 \div 10 =$  \_\_\_\_\_



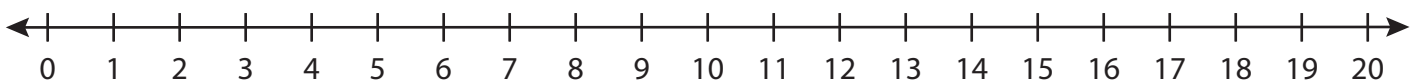
3)  $18 \div 3 =$  \_\_\_\_\_



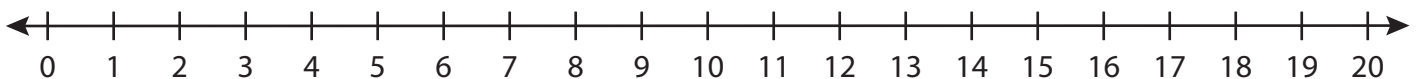
4)  $8 \div 1 =$  \_\_\_\_\_



5)  $10 \div 5 =$  \_\_\_\_\_



6)  $6 \div 6 =$  \_\_\_\_\_



# PREVIEW

Gain complete access to the largest  
collection of worksheets in all subjects!

Members, please  
log in to  
download this  
worksheet.

Not a member?  
Please sign up to  
gain complete  
access.

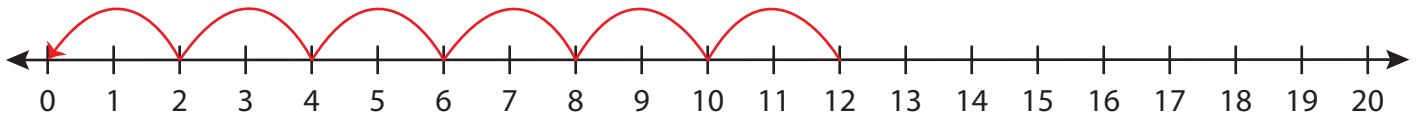
[www.mathworksheets4kids.com](http://www.mathworksheets4kids.com)

# Number Line Division

T1S5

Indicate hops on each number line and complete the division sentences.

1)  $12 \div 2 = \underline{6}$



2)  $20 \div 10 = \underline{\quad}$



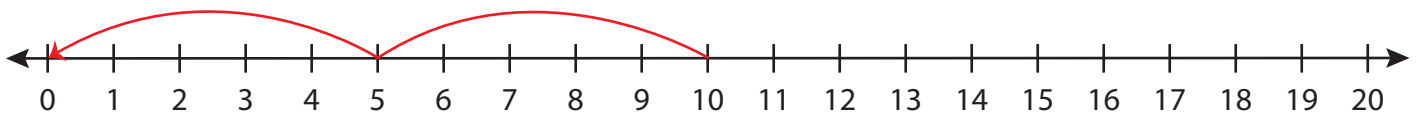
3)  $18 \div 3 = \underline{\quad}$



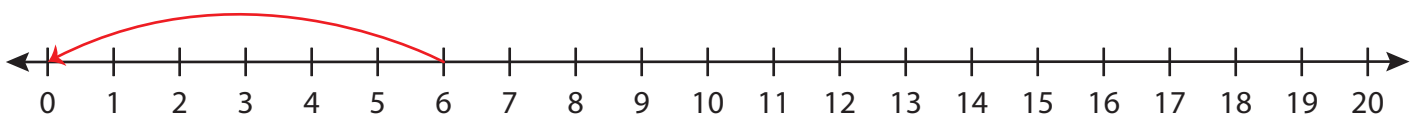
4)  $8 \div 1 = \underline{\quad}$



5)  $10 \div 5 = \underline{\quad}$



6)  $6 \div 6 = \underline{1}$



**PREVIEW**

Gain complete access to the largest collection of worksheets in all subjects!

Members, please log in to download this worksheet.

Not a member? Please sign up to gain complete access.

[www.mathworksheets4kids.com](http://www.mathworksheets4kids.com)