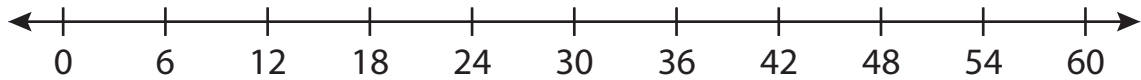


Number Line Division

T2S2

Indicate hops on each number line and complete the division sentences.

1) $54 \div 6 = \underline{\hspace{2cm}}$



2) $18 \div 3 = \underline{\hspace{2cm}}$



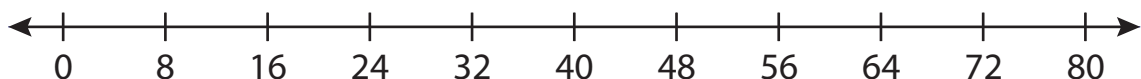
3) $32 \div 4 = \underline{\hspace{2cm}}$



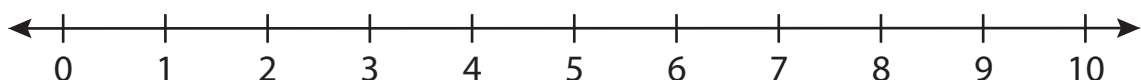
4) $21 \div 7 = \underline{\hspace{2cm}}$



5) $40 \div 8 = \underline{\hspace{2cm}}$



6) $8 \div 2 = \underline{\hspace{2cm}}$



PREVIEW

Gain complete access to the largest collection of worksheets in all subjects!

Members, please
log in to
download this
worksheet.

Not a member?
Please sign up to
gain complete
access.

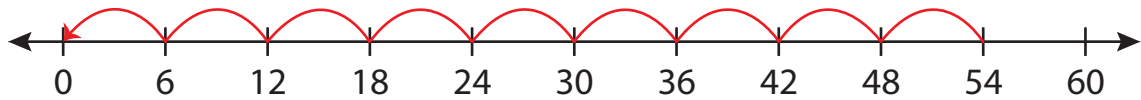
www.mathworksheets4kids.com

Number Line Division

T2S2

Indicate hops on each number line and complete the division sentences.

1) $54 \div 6 = \underline{9}$



2) $18 \div 3 =$



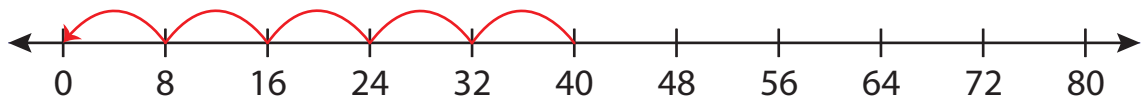
3) $32 \div 4 =$



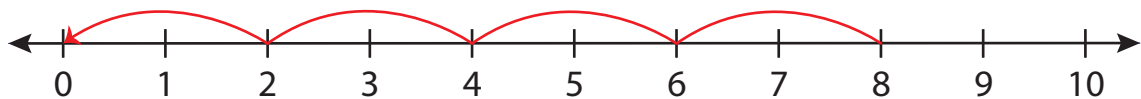
4) $21 \div 7 =$



5) $40 \div 8 =$



6) $8 \div 2 = \underline{4}$



PREVIEW

Gain complete access to the largest
collection of worksheets in all subjects!

Members, please
log in to
download this
worksheet.

Not a member?
Please sign up to
gain complete
access.

www.mathworksheets4kids.com