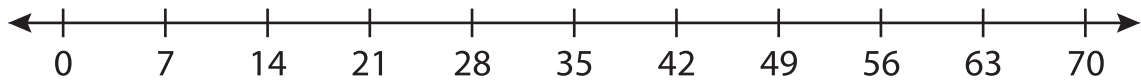


Number Line Division

T2S3

Indicate hops on each number line and complete the division sentences.

1) $49 \div 7 = \underline{\hspace{2cm}}$



2) $32 \div 8 = \underline{\hspace{2cm}}$



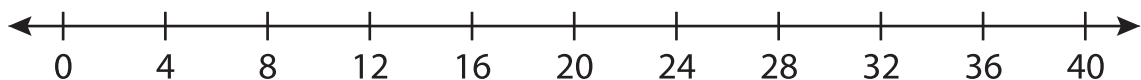
3) $10 \div 2 = \underline{\hspace{2cm}}$



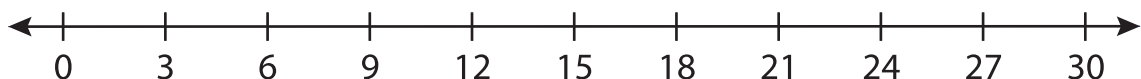
4) $80 \div 10 = \underline{\hspace{2cm}}$



5) $24 \div 4 = \underline{\hspace{2cm}}$



6) $12 \div 6 = \underline{\hspace{2cm}}$



PREVIEW

Gain complete access to the largest collection of worksheets in all subjects!

Members, please log in to download this worksheet.

Not a member? Please sign up to gain complete access.

www.mathworksheets4kids.com