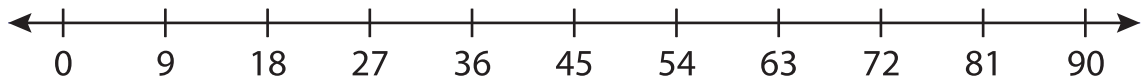


Number Line Division

T2S5

Indicate hops on each number line and complete the division sentences.

1) $81 \div 9 = \underline{\hspace{2cm}}$



2) $16 \div 2 = \underline{\hspace{2cm}}$



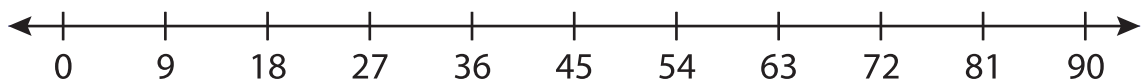
3) $24 \div 6 = \underline{\hspace{2cm}}$



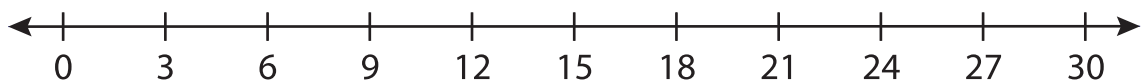
4) $40 \div 5 = \underline{\hspace{2cm}}$



5) $54 \div 9 = \underline{\hspace{2cm}}$



6) $15 \div 3 = \underline{\hspace{2cm}}$



PREVIEW

Gain complete access to the largest
collection of worksheets in all subjects!

Members, please
log in to
download this
worksheet.

Not a member?
Please sign up to
gain complete
access.

www.mathworksheets4kids.com